


NCFE Entry Level 2 Functional Skills Qualification in Mathematics (603/5053/2)

Paper number: Paper 13
Section A: Non-calculator Test



Time allowed: 25 minutes

Learner instructions

- Answer **all** questions.
- Read each question carefully.
- Write your answers in the spaces provided.
- Show your working, as marks may be awarded for working.
- This shows you where to write your working and answers. 
- State units in your answers, where appropriate.
- Check your work.

Learner information

- The maximum mark for this section is **8**.
- The marks available for **each** question are shown in brackets.

To be completed by the assessor		Mark
A	Activity 1	/ 8

Resources

You will need:

- a pen, with black or blue ink
- a pencil and eraser
- a 30 cm ruler.

Please complete the details below clearly and in BLOCK CAPITALS.

Learner name _____

Centre name _____

Learner number

Centre number

Do not turn over until the assessor tells you to do so.

Activity 1: Birdwatching

Jon plans a birdwatching trip with friends.
They want to go to a nature reserve.

1 (a) Each friend will drive to the nature reserve.

These are the distances they will drive to get there from home.

Mark	33.3 km
Jon	3.0 km
Pippa	3.3 km
Lily	33 km

Put the names in order, starting with the friend who lives nearest to the nature reserve.

[2 marks]

nearest

furthest



1 (b) Jon will bring some snacks.
He has seven packs of biscuits.
Each pack has four biscuits.

How many biscuits does Jon have in total?

Show your working.

[2 marks]



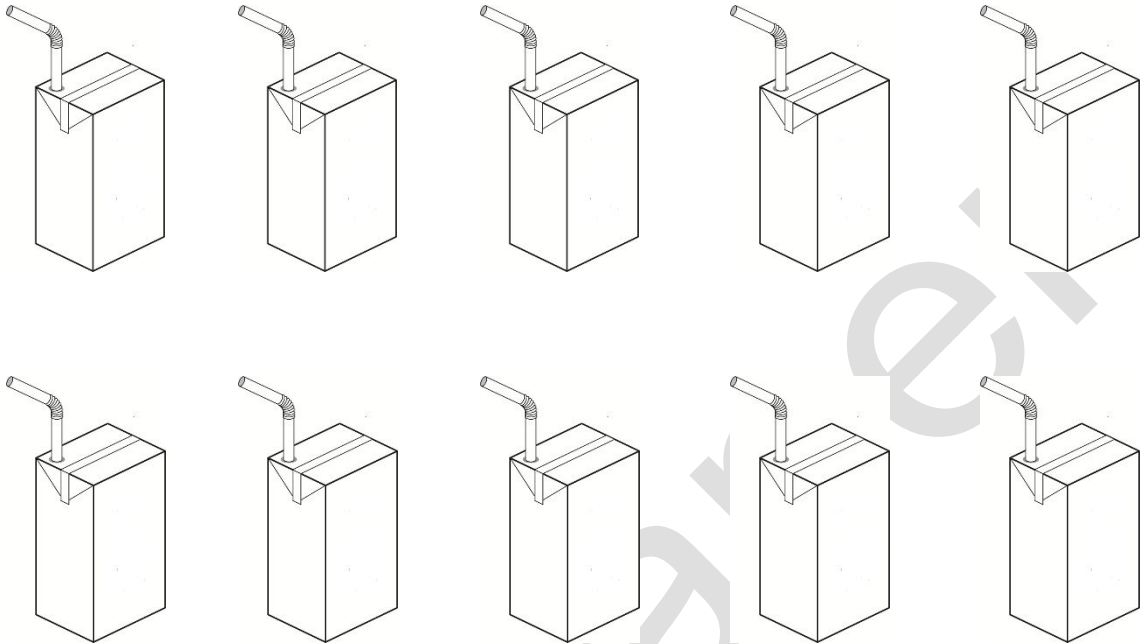
bast paper

Please turn over

1 (c)

Jon has 10 cartons of juice.

Four of the cartons are orange juice.



Jon thinks half of the cartons are orange juice.

Is he correct?


Give a reason for your answer.

[2 marks]



A large empty rectangular box for writing the answer.

1 (d) The cartons are cuboid.



How many edges does a cuboid have?

[1 mark]



past paper

Please turn over

1 (e) Jon thinks about the birds he might see.

This table shows the most common birds at the nature reserve in 2018 and 2019

Bird	2018	2019
sparrow	1st	3rd
starling	2nd	1st
blue tit	3rd	2nd
blackbird	4th	5th
robin	5th	4th

Which bird came 5th in 2019?

[1 mark]



[Total marks: 8]

This is the end of Section A.

This page is intentionally left blank.

past paper