


## NCFE Entry Level 2 Functional Skills Qualification in Mathematics (603/5053/2)

Paper number: Paper 11  
Section A: Non-calculator Test



**Time allowed:** 25 minutes

### Learner instructions

- Answer **all** questions.
- Read each question carefully.
- Write your answers in the spaces provided.
- Show your working, as marks may be awarded for working.
- This shows you where to write your working and answers. 
- State units in your answers, where appropriate.
- Check your work.

### Learner information

- The maximum mark for this section is **8**.
- The marks available for **each** question are shown in brackets.

To be completed by the assessor		Mark
A	Activity 1	/ 8

### Resources

You will need:

- a pen, with black or blue ink
- a pencil and eraser
- a 30 cm ruler.

**Please complete the details below clearly and in BLOCK CAPITALS.**

Learner name \_\_\_\_\_

Centre name \_\_\_\_\_

Learner number

Centre number

**Do not turn over until the assessor tells you to do so.**

### Activity 1: Buying a greenhouse

Jay wants to buy his first greenhouse.

1 (a) Jay has £95 to buy a greenhouse.

Write 95 in words.

[1 mark]



1 (b) Jay has £95

He buys a greenhouse.



How much money will Jay have left over?

Show your working.

[2 marks]



1 (c) The owner says he can deliver the greenhouse.

The delivery date is 13/7/2021

May							June							July						
Mo	Tu	We	Th	Fr	Sa	Su	Mo	Tu	We	Th	Fr	Sa	Su	Mo	Tu	We	Th	Fr	Sa	Su
					1	2		1	2	3	4	5	6				1	2	3	4
3	4	5	6	7	8	9	7	8	9	10	11	12	13	5	6	7	8	9	10	11
10	11	12	13	14	15	16	14	15	16	17	18	19	20	12	13	14	15	16	17	18
17	18	19	20	21	22	23	21	22	23	24	25	26	27	19	20	21	22	23	24	25
24	25	26	27	28	29	30	28	29	30					26	27	28	29	30	31	
31																				

What day of the week does he deliver the greenhouse?

[1 mark]



1 (d) The greenhouse will be delivered at half past two.


Which clock shows half past two?

Tick (✓) your answer.

[1 mark]




A ( )



B ( )



C ( )



D ( )



Please turn over

1 (e) The greenhouse has nine shelves.  
Jay puts 12 pots on each shelf.  
How many pots does he put on the shelves in total?

[2 marks]



--

1 (f) Jay lives at number 27 Cross Street.  
Some of the house numbers are missing.  
The house numbers go up in sequence.  
Tick (✓) the house where Jay lives.

[1 mark]



13	15	17						
----	----	----	--	--	--	--	--	--

-----  
Cross Street  
-----

[Total marks: 8]

This is the end of Section A.

past paper

**This page is intentionally left blank.**