


## NCFE Entry Level 2 Functional Skills Qualification in Mathematics (603/5053/2)

Paper number: Paper 10  
Section A: Non-calculator Test



**Time allowed:** 25 minutes

### Learner instructions

- Answer **all** questions.
- Read each question carefully.
- Write your answers in the spaces provided.
- Show your working, as marks may be awarded for working.
- This shows you where to write your working and answers. 
- State units in your answers, where appropriate.
- Check your work.

### Learner information

- The maximum mark for this section is **8**.
- The marks available for **each** question are shown in brackets.

To be completed by the assessor		Mark
A	Activity 1	/ 8

### Resources

You will need:

- a pen, with black or blue ink
- a pencil and eraser
- a 30 cm ruler.

**Please complete the details below clearly and in BLOCK CAPITALS.**

Learner name \_\_\_\_\_

Centre name \_\_\_\_\_

Learner number

Centre number

**Do not turn over until the assessor tells you to do so.**

### Activity 1: The farm


Dave works on a farm.

1 (a) Dave starts work at quarter past six.


Which clock shows quarter past six?

Tick (✓) your answer.

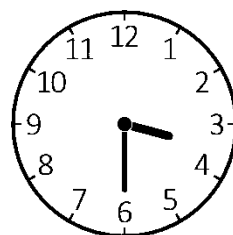
[1 mark]




A ( )



B ( )



C ( )



D ( )



**1 (b)** Dave has 63 white lambs and 45 black lambs on his farm.  
He thinks he has 118 lambs in total on the farm.  
Is Dave correct?  
Give a reason for your answer.

**[3 marks]**

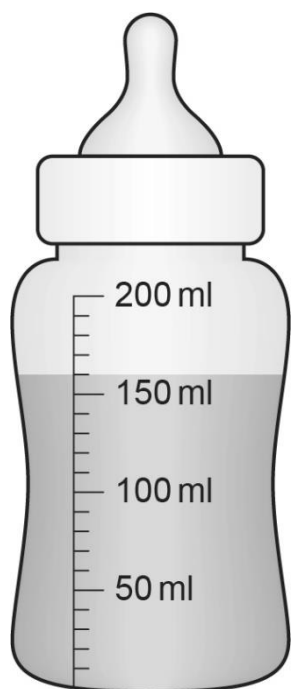


past paper

**Please turn over**

1 (c) Dave feeds milk to the lambs.

He uses a bottle.




How much milk is in the bottle to the nearest **labelled** division?

[1 mark]



- 1 (d) Dave weighs four lambs.  
Which lamb weighs the most?  
Tick (✓) your answer.

[1 mark]




4.3 kg

A ( )




5.0 kg

B ( )



5.3 kg

C ( )



5.2 kg

D ( )



- 1 (e) Dave feeds the cows eight bales of hay every day.  
How many bales of hay will he feed the cows in one week?  
Show your working.

[2 marks]



[Total marks: 8]

This is the end of Section A.