


NCFE Entry Level 1 Functional Skills Qualification in Mathematics (603/5057/X)

Paper number: Paper 13
Section B: Calculator Test



Time allowed: 1 hour

Learner instructions

- Answer **all** questions.
- Read each question carefully.
- Write your answers in the spaces provided.
- Show your working.
- This shows you where to write your working and answers. 
- Check your work.

Learner information

- The maximum mark for this section is **18**.
- The marks available for **each** question are shown in brackets.

Resources

You will need:

- a pen, with black or blue ink
- a pencil and eraser
- a 30 cm ruler
- a calculator.

To be completed by the assessor		Mark
B	Activity 2	/ 6
	Activity 3	/ 6
	Activity 4	/ 6

Please complete the details below clearly and in BLOCK CAPITALS.

Learner name _____

Centre name _____

Learner number Centre number

Do not turn over until the assessor tells you to do so.

Activity 2: Ordering PE kit

Rosie and her mum order PE kit online.

2 (a) Rosie and her mum look at PE kit online.

This is a list of the items they need to buy.

shopping list	
shorts	£6
t-shirt	£8
socks	£4
jumper	£11
tracksuit	£12

What is the price of the t-shirt?

[1 mark]



2 (b) Rosie and her mum order the items on Wednesday.

They will arrive in two days.

Rosie thinks the items will arrive on Thursday.

Is she correct?


Give a reason for your answer.

[2 marks]



2 (c) Rosie and her mum receive parcels in the post.

Rosie looks at the clock when the parcels arrive.



What time do the parcels arrive?

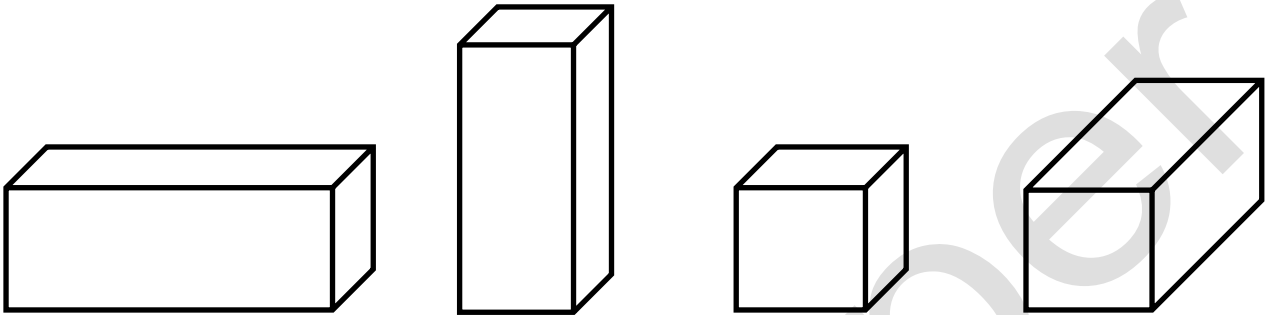
[1 mark]



Please turn over

2 (d) One of the parcels is a cube.
Which of these shapes is a cube?
Tick (✓) your answer.

[1 mark]



A ()

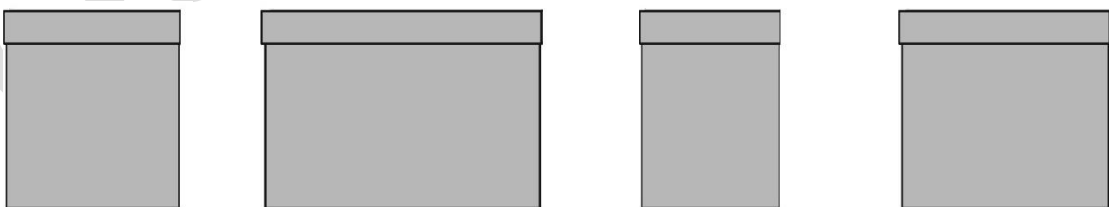
B ()

C ()

D ()

2 (e) The tracksuit is in the widest parcel.
Which parcel is the tracksuit in?
Tick (✓) your answer.

[1 mark]



A ()

B ()

C ()

D ()

[Total marks: 6]

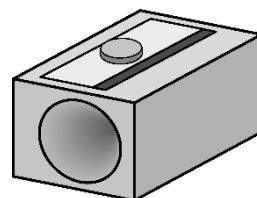
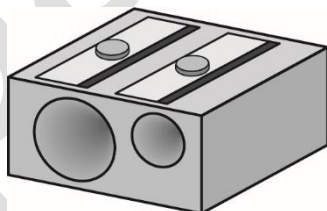
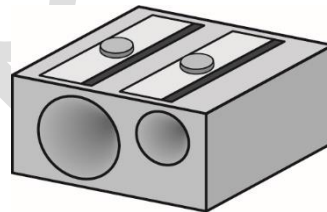
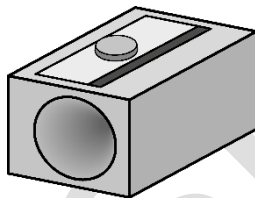
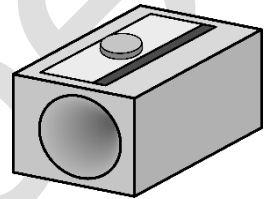
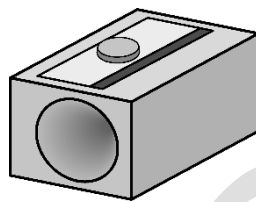
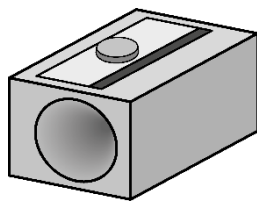
Activity 3: Buying stationery

Rosie and her mum go shopping for stationery.

3 (a) Rosie wants to buy a pencil sharpener with two holes.

Tick (✓) all of the pencil sharpeners she could buy.

[1 mark]



Please turn over

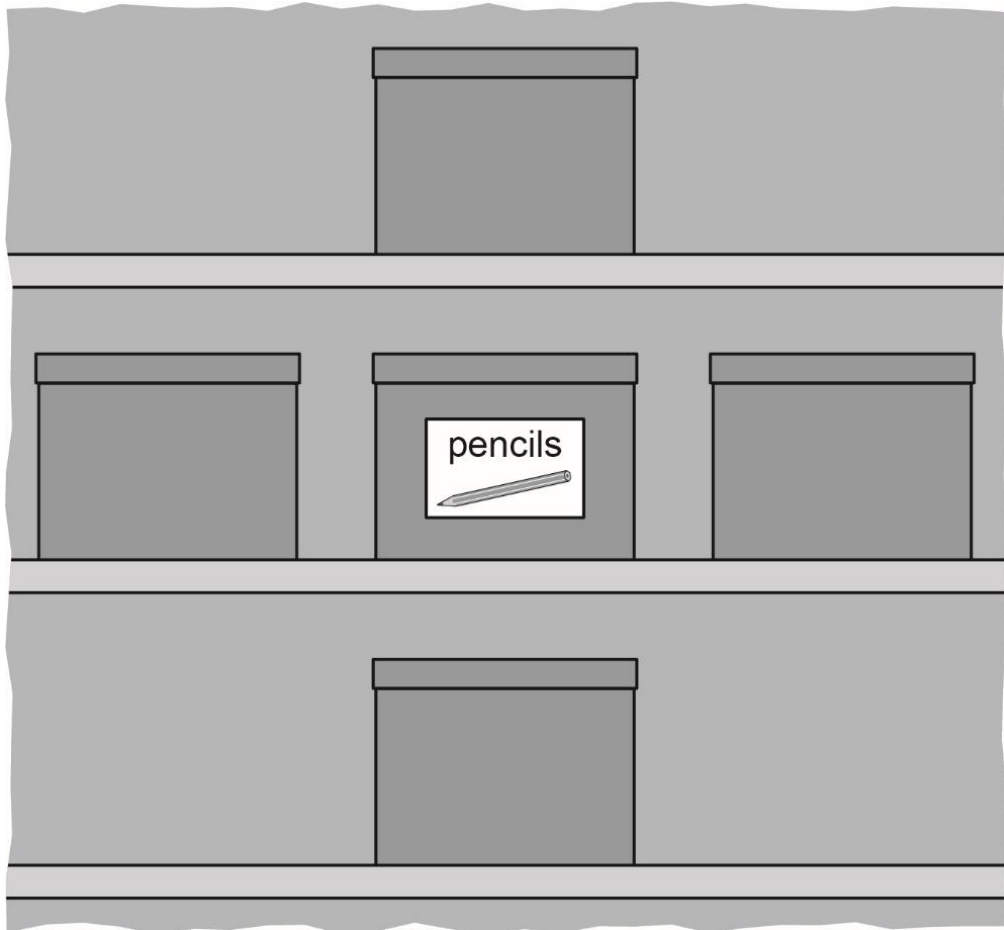
3 (b)

Rosie looks for the pens.

The pens are in the box above the pencils.

Tick (✓) the box with the pens in.

[1 mark]



pear



3 (c) Rosie and her mum look at pencil cases.

Rosie buys the largest pencil case.

Which pencil case does Rosie buy?

Tick (✓) your answer.

[1 mark]



A ()

B ()

C ()

D ()

3 (d) Rosie uses a £5 note to buy the pencil case.

The price of the pencil case is £3

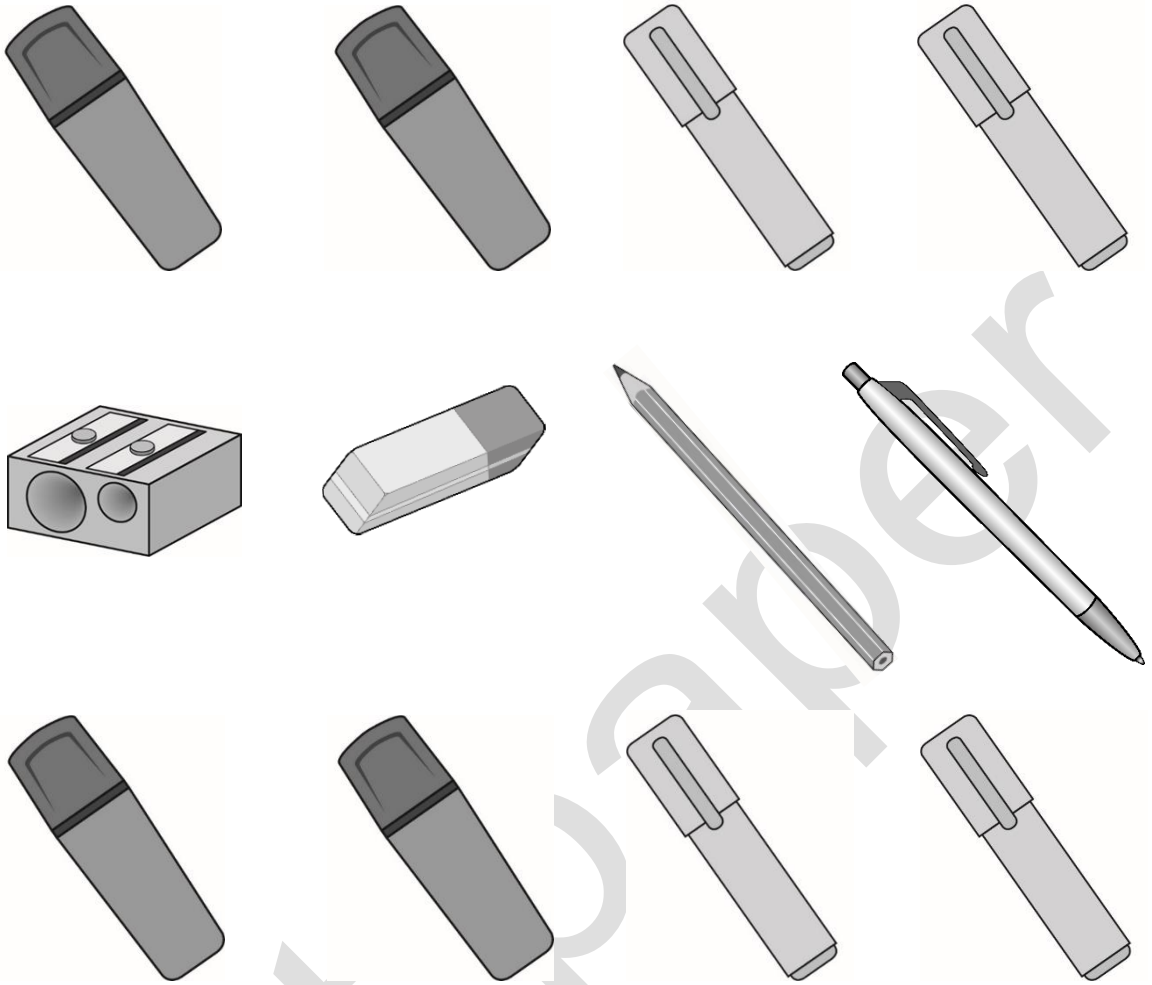
How much money does Rosie have left over?

[2 marks]



Please turn over

3 (e) Rosie puts these items in her pencil case.



How many items does she put in her pencil case?

[1 mark]



[Total marks: 6]

Activity 4: First day at school





Rosie goes to school.

4 (a) Rosie starts school at nine o'clock.

Which clock shows nine o'clock?

Tick (✓) your answer.

[1 mark]



A ()

B ()

C ()

D ()

Please turn over

4 (b) Rosie draws a block chart to show how her friends travel to school.

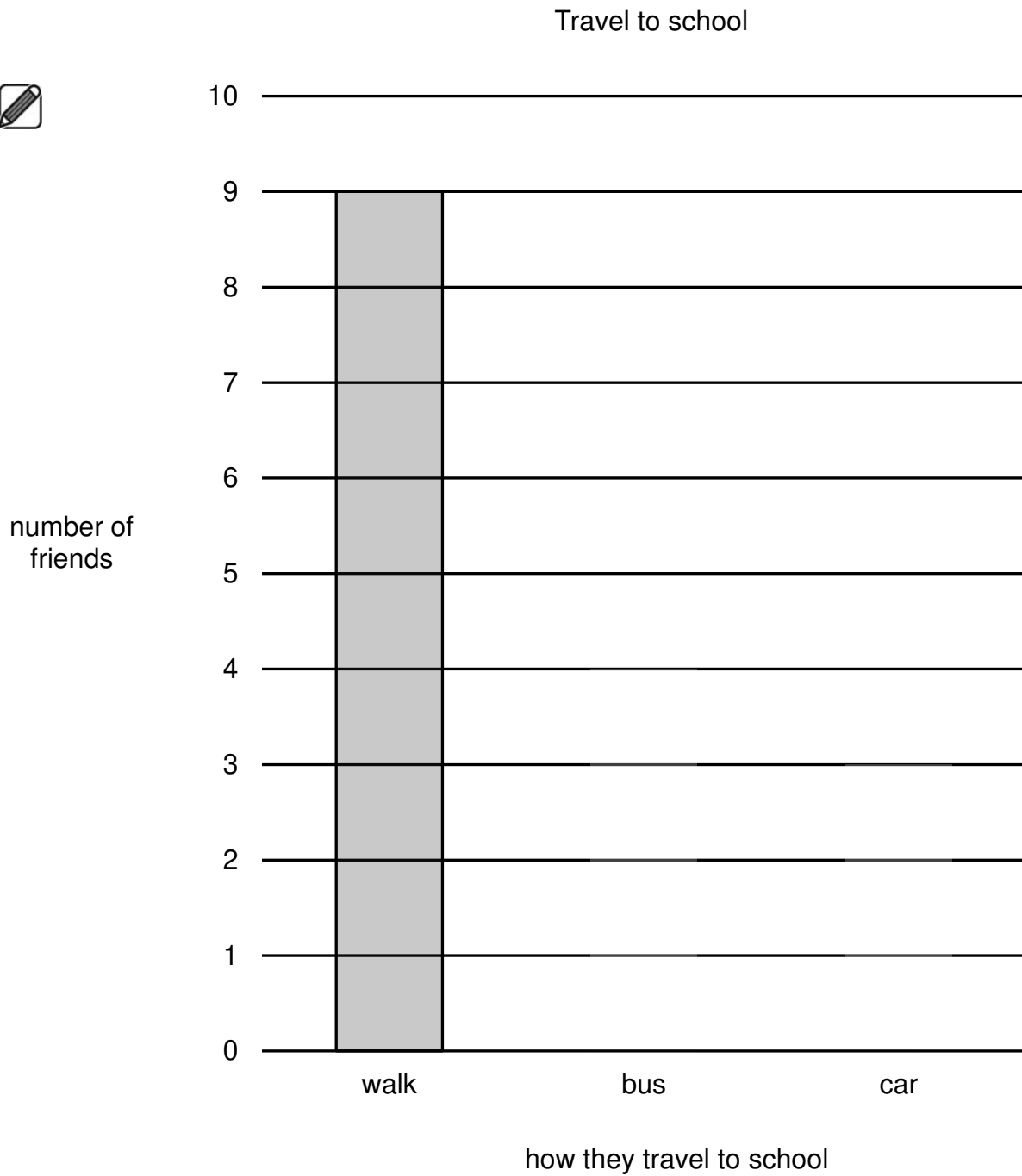
Nine friends walk to school.

Four friends get the bus.

Three friends go by car.

Complete the block chart.

[2 marks]



- 4 (c)** Rosie takes three tests.
Each test has 20 questions.
These are her scores.

spelling 16	maths 15	art 18
--------------------	-----------------	---------------

In which test does Rosie get the highest score?

[1 mark]



- 4 (d)** Rosie draws a poster showing all of the seasons in a year.
How many seasons are on the poster?

[1 mark]



Please turn over

4 (e) Rosie puts her poster on the shortest stand.

Which stand does she put her poster on?

Tick (✓) your answer.

[1 mark]



A ()

B ()

C ()

D ()

[Total marks: 6]

This is the end of the internal assessment.

This page is intentionally left blank.

bast paper