


NCFE Entry Level 1 Functional Skills Qualification in Mathematics (603/5057/X)

Paper number: Paper 12
Section A: Non-calculator Test



Time allowed: 20 minutes

Learner instructions

- Answer **all** questions.
- Read each question carefully.
- Write your answers in the spaces provided.
- Show your working.
- This shows you where to write your working and answers. 
- Check your work.

Learner information

- The maximum mark for this section is **6**.
- The marks available for **each** question are shown in brackets.

To be completed by the assessor		Mark
A	Activity 1	/ 6

Resources

You will need:

- a pen, with black or blue ink
- a pencil and eraser
- a 30 cm ruler.

Please complete the details below clearly and in BLOCK CAPITALS.

Learner name _____

Centre name _____

Learner number

Centre number

Do not turn over until the assessor tells you to do so.

Activity 1: Computer games

Fez goes into a computer games shop.

1 (a) Fez sees some games.

There are five games on the top shelf.

There are 14 games on the bottom shelf.

How many games are there in total?

[2 marks]





1 (b)

Fez looks at some of the games.

Each one shows the number of levels in the game.

Tick (✓) the games that have 16 levels.

[1 mark]



1 (c)

Fez reads about a game.

This game has eighteen levels.

Write eighteen in numbers.

[1 mark]



Please turn over

- 1 (d) Fez buys a computer game.
He gets this coin in change.



What value does this coin show?

[1 mark]



- 1 (e) Fez buys a game in summer.
He will buy a new game in the season after summer.
In which season will Fez buy the new game?

[1 mark]



[Total marks: 6]

This is the end of Section A.

This page is intentionally left blank.