

**Functional Skills  
Mathematics Assessment  
Entry Level 2**

**There are 2 sections in this assessment, Part A and Part B.**



Learner name

---

Run ID

---

Learner signature

---

Centre

---

Assessment date

---

**Part A - Non-calculator**

**You have 30 minutes to  
complete this section.**

**You must not use a  
calculator.**

**Instructions to learners**

**Part A: Non-calculator**

You will need a pen, pencil and a ruler.

Use only blue or black ink. Pencil **must only** be used for drawing.

You can write or draw to show your answers.

You have **30 minutes** to complete **Part A**.

### Question 1

Put these numbers in order from largest to smallest.

98            122            176            24

Write your answer in the box below.

**(1 mark)**

Answer \_\_\_\_\_

### Question 2


$68 \div 6 =$

Show your working out and write your answer in the box below.

**(2 marks)**

Answer \_\_\_\_\_

### Question 3



How many pencils are there in total?

Show your working out and write your answer in the box below.

**(2 marks)**

Answer \_\_\_\_\_

### **Question 4**

Yousef has 75 grey paving slabs and 23 red paving slabs.



Yousef needs 96 paving slabs for a patio.

**Does Yousef have enough paving slabs? Show your workings.**

Show your working out and write your answer in the box below.

**(2 marks)**

Answer \_\_\_\_\_

## **End of Part A Non-calculator**

**The invigilator will collect this section when  
the assessment time has ended.**

**The section must be collected by the invigilator  
before proceeding to Part B.**

**NOCN Group**  
Acero Building  
1 Concourse Way  
Sheaf Street  
Sheffield  
S1 2BJ

Ofqual Approved  
©NOCN



**This page is intentionally blank.**

**Functional Skills  
Mathematics Assessment  
Entry Level 2**

Learner name

---

Run ID

---

Learner signature

---

Centre

---

Assessment date

---



**Part B - Calculator**

**You have 1 hour  
to complete this section.**

**You may use a calculator.**

**Instructions to learners**

**Part B: Calculator**

You will need a pen, pencil, ruler and a calculator.

Use only blue or black ink. Pencil **must only** be used for drawing.

You can write or draw to show your answers.

You have **1 hour** to complete **Part B**.

### Question 5

Tom's birthday is on 2<sup>nd</sup> April.

Emma's birthday is 12 days later.

April						
		1	2	3	4	5
6	7	8	9	10	11	12
13	14	15	16	17	18	19
20	21	22	23	24	25	26
27	28	29	30			

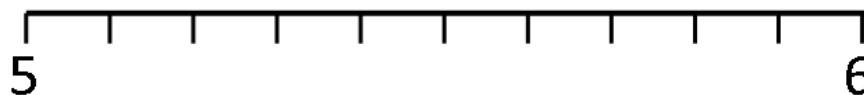
**What is the date of Emma's birthday?**

Write your answer in the box below.

**(1 mark)**

Answer \_\_\_\_\_

### Question 6



**What number is the arrow pointing to?**

Write your answer in the box below.

**(1 mark)**

Answer \_\_\_\_\_



### Question 7

Jodie has a ribbon that is 100cm long.

**How long is a  $\frac{1}{4}$  of the ribbon?**

Show your working out and write your answer in the box below.

**(1 mark)**

Answer \_\_\_\_\_

### Question 8

Draw the correct time on the clock face.

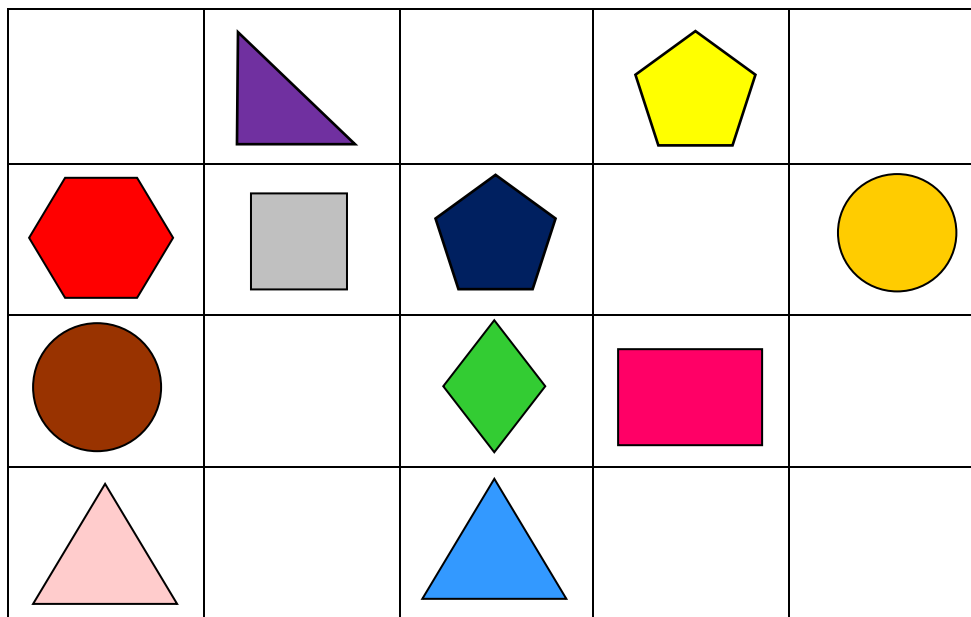
**(1 mark)**



20:00

### Question 9

Sam has cut out and stuck some shapes on a grid.



Sam has stuck her favourite shape to the right of the square.

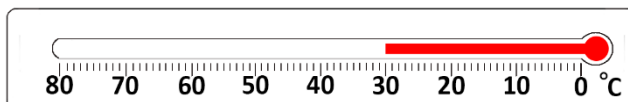

**What is the name of Sam's favourite shape?**

Write your answer in the box below.

**(1 mark)**

Answer \_\_\_\_\_

### Question 10



What is the higher temperature recorded on the thermometers?

Write your answer in the box below.

(1 mark)

Answer \_\_\_\_\_

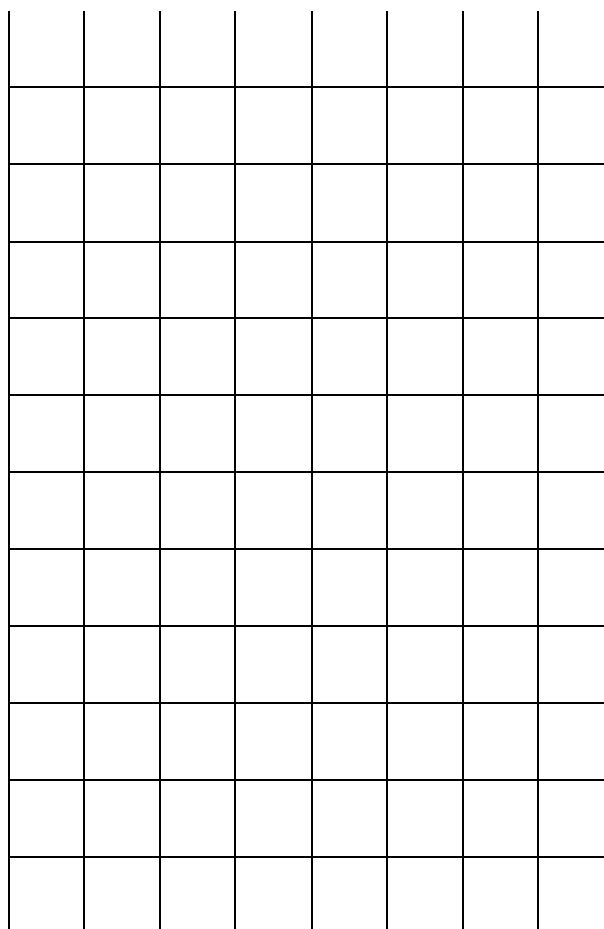
### Question 11

Samira asked some people what mobile phone they have. Here is her tally chart.

Apple	
Samsung	
Other	

Draw a bar graph to show Samira's results.

(4 marks)



## **Question 12**

**How many corners does a hexagon have?**

Write your answer in the box below.

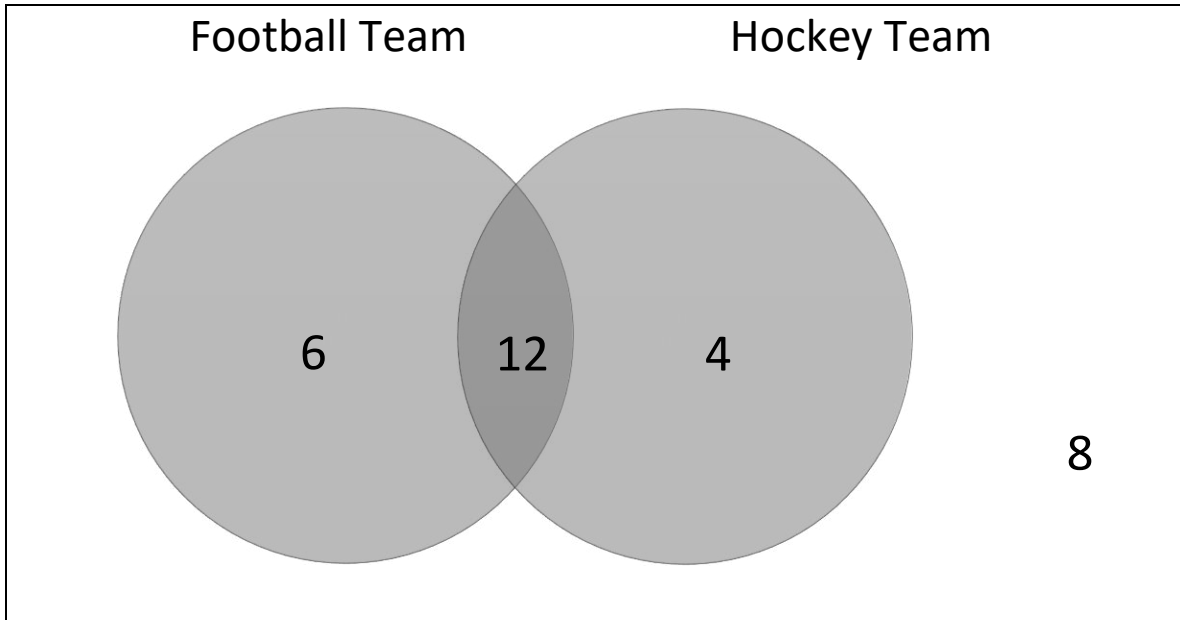
**(1 mark)**

Answer \_\_\_\_\_

### Question 13

Ching asks her friends if they play in a football or hockey team.

She records the information in a diagram.



**a) How many friends did she ask in total?**

Show your working out and write your answer in the box below.

**(2 marks)**

Answer \_\_\_\_\_

**b) How many friends play in a football and hockey team?**

Write your answer in the box below.

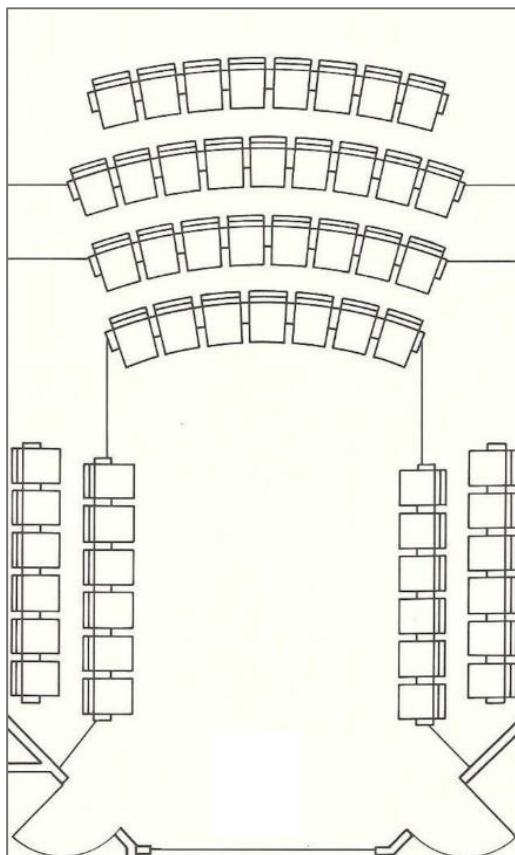
**(1 mark)**


Answer \_\_\_\_\_

### Question 14

Keir wants to book a room for a show.

This is the seating plan.



 = one seat

Keir needs 62 seats.

**Are there enough seats?**

Write your answer in the box below.

**(1 mark)**

Answer \_\_\_\_\_

### **Question 15**

Linda has £53 to spend on shopping.

She spends £37.

**How much money does she have left? Use the correct money symbol.**

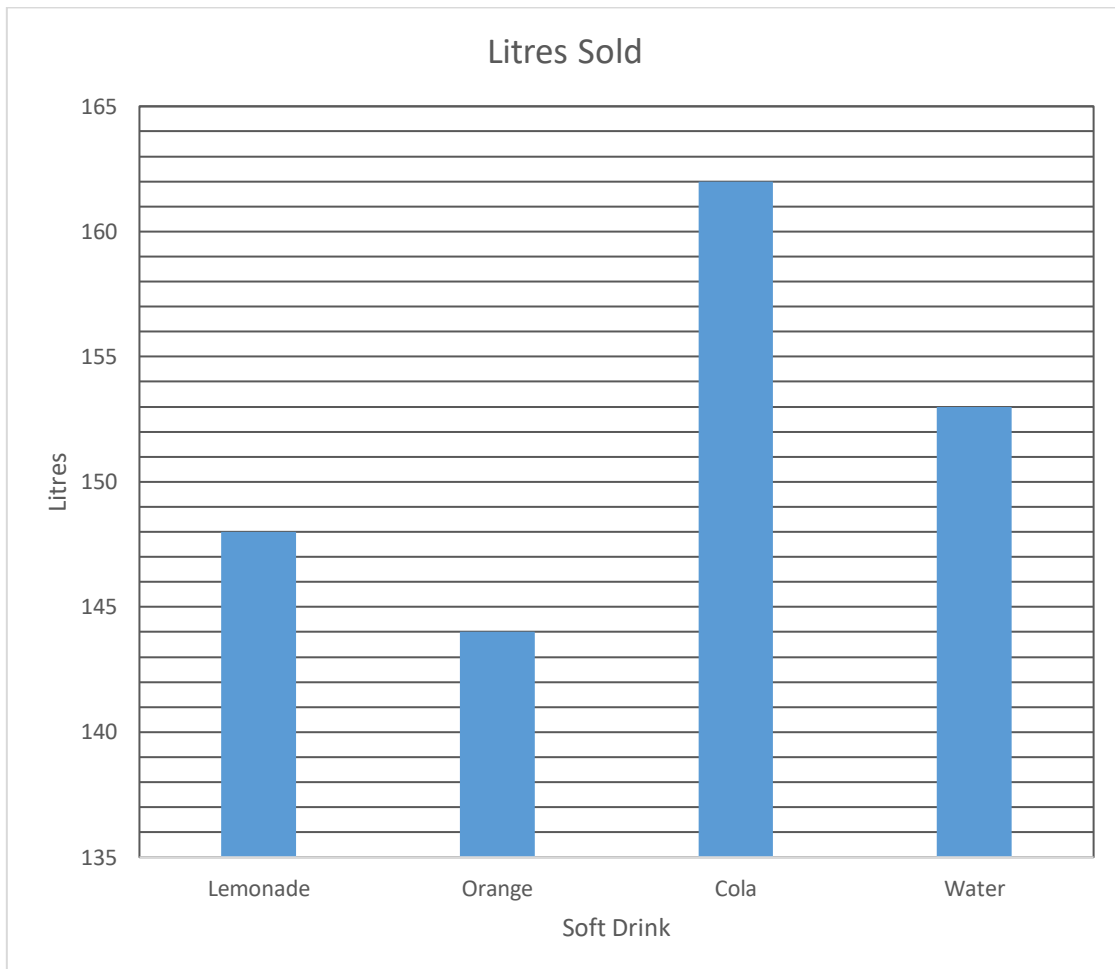
Write your answer in the box below.

**(2 marks)**

Answer \_\_\_\_\_



### Question 16



How many more litres of lemonade are sold compared to orange? Use the correct unit.

Write your answer in the box below.

(2 marks)

Answer \_\_\_\_\_

### Question 17

Dan has been asked to weigh some flour.

**Which unit of measure should he choose?**

Tick the correct one.

**(1 mark)**

<b>litres</b>	
<b>g</b>	
<b>ml</b>	

### Question 18

**How many weeks are in one year?**

Show your working out and write your answer in the box below.

**(1 mark)**

Answer \_\_\_\_\_

## **End of Part B Calculator**

**The invigilator will collect this section when the  
assessment time has elapsed.**

**End of Assessment.**

**NOCN Group**  
Acero Building  
1 Concourse Way  
Sheaf Street  
Sheffield  
S1 2BJ

Ofqual Approved  
©NOCN



**Functional Skills**  
**Mathematics Assessment**  
**Entry Level 2**  
**Marking Sheet**

Question	Available marks	Marker	IQA Marker
Q1	1		
Q2	2		
Q3	2		
Q4	2		
Q5	1		
Q6	1		
Q7	1		
Q8	1		
Q9	1		
Q10	1		
Q11	4		
Q12	1		
Q13a	2		
Q13b	1		
Q14	1		
Q15	2		
Q16	2		
Q17	1		
Q18	1		
<b>Total</b>	<b>28</b>		

**Marker's name and date**

**Moderator's name and date (if sampled)**

---



---

**Comments from Marker**

---



---



---



---