



**PASS**  
**FUNCTIONAL**  
**SKILLS**

# Functional Skills Model Solutions

[PassFunctionalSkills.co.uk](https://PassFunctionalSkills.co.uk)

[Book Functional Skills Exams](#)

[See our Functional Skills Course](#)

More Free Revision Materials

[Maths Level 2](#)

[Maths Level 1](#)

[English Level 2](#)

[English Level 1](#)

**ENTRY LEVEL 3  
FUNCTIONAL SKILLS  
MATHS – PART A**



openawards

**QUESTION PAPER  
SAMPLE ASSESSMENT MATERIAL**

Learner name:	Auto-filled by XAMS
Learner number:	Auto-filled by XAMS
Your Signature:	
Today's date:	Auto-filled by XAMS



Total marks available: **9 marks**



Time limit: **30 minutes**

**You need:**



This question and answer paper



A **pen** with black or blue ink




A **pencil** and an eraser



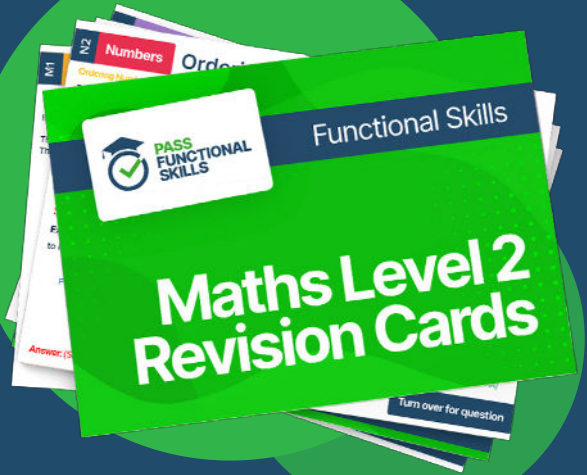




**PASS**  
**FUNCTIONAL**  
**SKILLS**



Functional Skills Maths  
Level 2 Practice Papers



Functional Skills Maths  
Level 2 Revision Cards



Functional Skills English Level 2  
Practice Papers & Revision Cards



Functional Skills Maths  
Level 2 Pocket Revision Guide

Or visit

[passfunctionalskills.co.uk](http://passfunctionalskills.co.uk)

**You cannot use:**

The Internet



A calculator

**Instructions**

1. Check your name is correct on Page 1  
Write your **signature** if it is
2. **Read** each text and question carefully
3. **Write** your answers in the spaces provided
4. Answer **all** the questions  
Remember to show your **workings**
5. **Check** your work at the end
6. Ask your teacher for more **paper** if you need it.  
Write your name on any extra pieces of paper.
- 7 Your teacher will **collect** your paper at the end of the assessment



Answer:





**Question 1**

(1 mark)

Work out  $53 \times 8$ .

$$\begin{array}{r|l} x & 50 \quad 3 \\ \hline 8 & 400 \quad 24 \end{array}$$

$$400 + 24 = 424$$

**Question 2**

(2 marks)

Jadon is dancing in a show.

This is the timetable for the show.

Order of activities	Time taken
Group dances	25 minutes
Break	10 minutes
Solo dances	20 minutes
Award presentation	15 minutes

The show starts at **7.00pm**.Jadon's dance will be the first **solo** dance.

What time will his dance start?

Show your calculations below.

$$25 + 10 = 35 \text{ minutes}$$

$$35 \text{ minutes after } 7\text{pm} = 7:35\text{pm}$$

The dance will start at 7:35pm

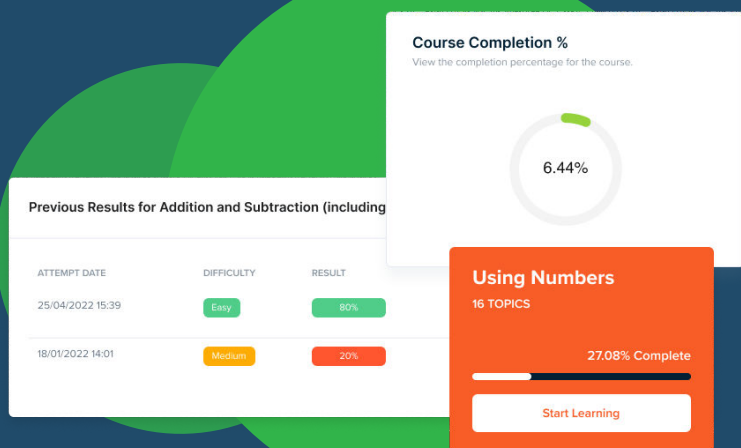
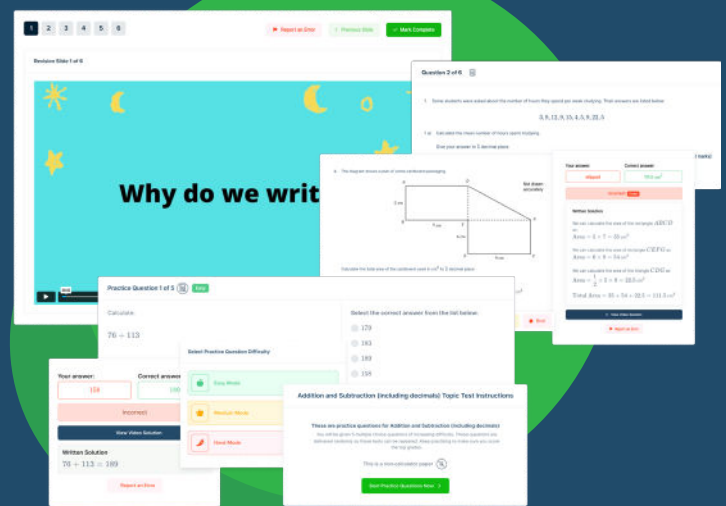


# FUNCTIONAL SKILLS ONLINE COURSES



- ✓ Your answers are analysed to determine your Current Level
- ✓ Suggested courses for you to enrol on based on your calculated level
- ✓ Always know the level you are currently working at
- ✓ Determine when you are ready to sit your exam

- ✓ Explainer videos on every topic
- ✓ Quick-fire style multiple choice questions
- ✓ Test your knowledge with exam-style questions
- ✓ Written solutions for all questions



- ✓ See your progress through as you progress through each topic area
- ✓ Get your average scores for practice questions, topic tests and mock exams
- ✓ View all practice question, topic test and mock exam attempts over time
- ✓ View historical attempts to analyse your progress over time

Or visit  
[passfunctionalskills.co.uk](https://passfunctionalskills.co.uk)



**Question 3****(2 marks)**

The list shows the money made **this year** from ticket sales, programme sales and refreshments.

Ticket sales	£425.50
Programme Sales	£127.50
Refreshments	£178.00

How much money has been made **in total from these sales** this year?

Show your workings

$$\begin{array}{r}
 425.50 \\
 127.50 \\
 178.00 \\
 \hline
 731.00 \\
 \hline
 121
 \end{array}$$

Total = £731

**Question 4****(1 mark)**

What is  $178 - 149$ ?

Show your workings.

$$178 - 149 = 29$$

↳

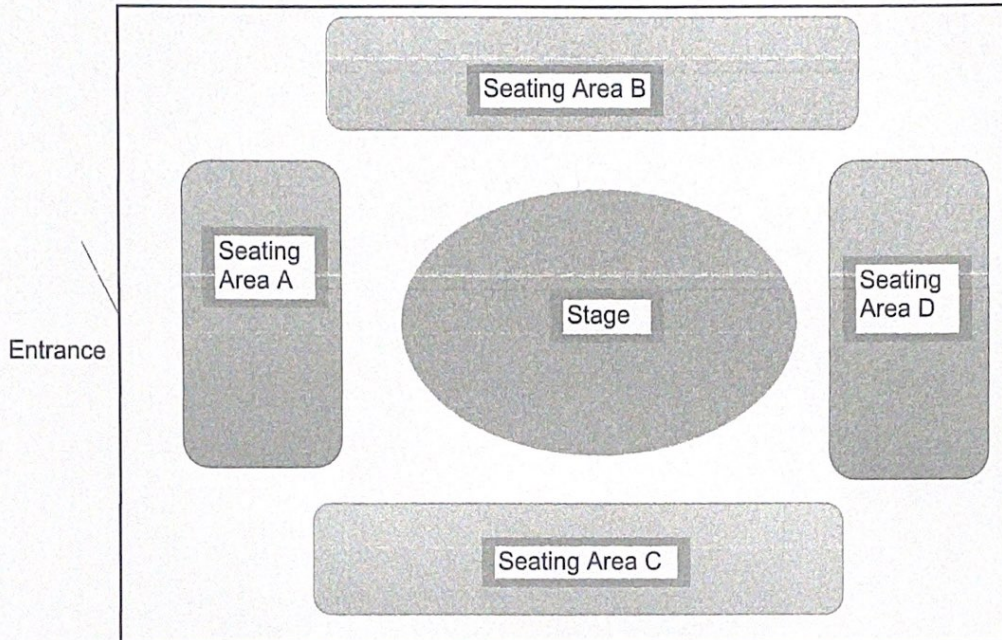
$$\begin{array}{r}
 1\overset{6}{\cancel{7}}8 \\
 - 149 \\
 \hline
 029
 \end{array}$$



## Question 5

(3 marks)

This is a plan of the stage and the seating for the show.



There are 586 seats in total in seating areas A, B, C and D.

There are 292 seats altogether in seating areas A and D.

There are 142 seats in seating area B.

How many seats are there in seating area C?

Show your workings.

$\begin{array}{r} 292 \\ + 142 \\ \hline 434 \\ \hline 1 \end{array}$	$\begin{array}{r} 586 \\ - 434 \\ \hline 152 \end{array}$	<p>There are 152 seats in seating area C</p>
---	---	--

End of Part A