



PASS
FUNCTIONAL
SKILLS

Functional Skills Model Solutions

PassFunctionalSkills.co.uk

[Book Functional Skills Exams](#)

[See our Functional Skills Course](#)

More Free Revision Materials

[Maths Level 2](#)

[Maths Level 1](#)

[English Level 2](#)

[English Level 1](#)



NCFE Entry Level 2 Functional Skills Qualification in Mathematics


(603/5053/2)

Paper number: Paper 1
Section A: Non-calculator Test



Time allowed: 25 minutes

Learner instructions

- Answer **all** questions.
- Read each question carefully.
- Write your answers in the spaces provided.
- Show your working, as marks may be awarded for working.
- This shows you where to write your working and answers. 
- State units in your answers, where appropriate.
- Check your work.

Learner information

- The maximum mark for this section is **8**.
- The marks available for **each** question are shown in brackets.

To be completed by the assessor		Mark
A	Activity 1	/ 8

Resources

You will need:

- a pen, with black or blue ink
- a pencil and eraser
- a 30 cm ruler.

Please complete the details below clearly and in **BLOCK CAPITALS**.

Learner name _____

Centre name _____

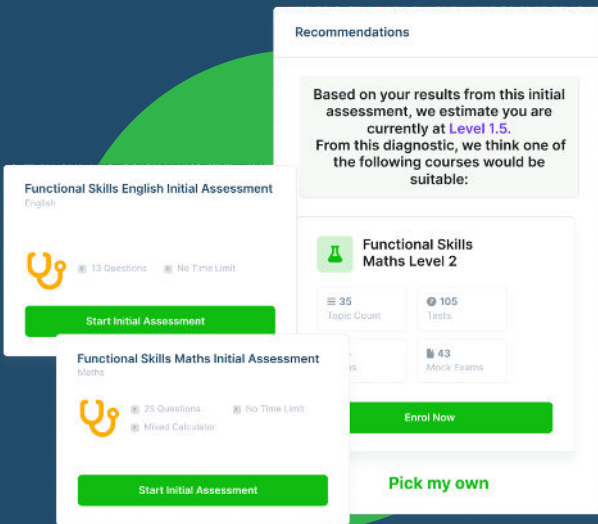
Learner number

Centre number

Do not turn over until the assessor tells you to do so.

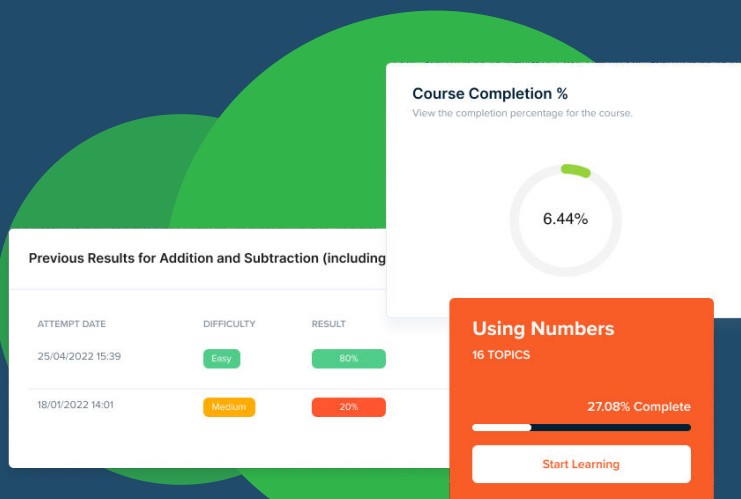
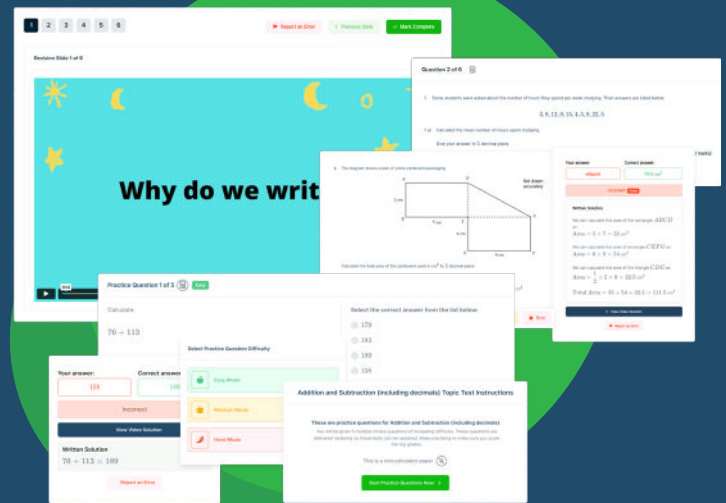


FUNCTIONAL SKILLS ONLINE COURSES



- ✓ Your answers are analysed to determine your Current Level
- ✓ Suggested courses for you to enrol on based on your calculated level
- ✓ Always know the level you are currently working at
- ✓ Determine when you are ready to sit your exam

- ✓ Explainer videos on every topic
- ✓ Quick-fire style multiple choice questions
- ✓ Test your knowledge with exam-style questions
- ✓ Written solutions for all questions



- ✓ See your progress through as you progress through each topic area
- ✓ Get your average scores for practice questions, topic tests and mock exams
- ✓ View all practice question, topic test and mock exam attempts over time
- ✓ View historical attempts to analyse your progress over time

Or visit
passfunctionalskills.co.uk

Activity 1: The leisure centre


Jim works in a leisure centre.

1(a) Jim leaves home at quarter to seven in the morning.

Which clocks show this time?

Tick (✓) two answers.


[2 marks]



A (✓)




B ()



C ()



D ()



E ()



F (✓)

1(b)

Jim gets 8 weeks holiday a year.

How many weeks does he work in a year?

[2 marks]



$$52 - 8 = \underline{44}$$

1(c)

During a busy time, Jim works 7 hours every day for 12 days.

How many hours in total does he work?

[2 marks]




$$7 \times 12 = \underline{84}$$

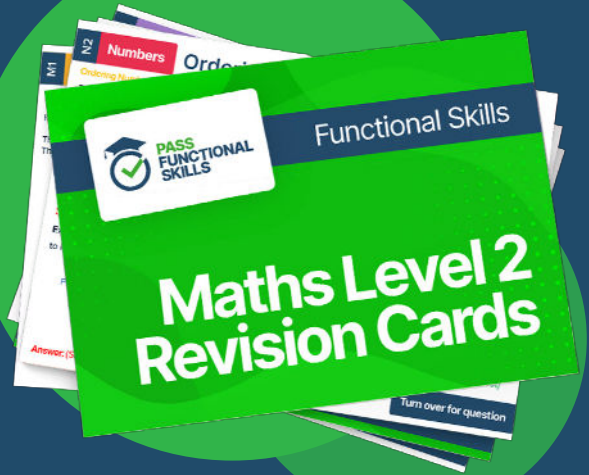
Please turn over



PASS
FUNCTIONAL
SKILLS



Functional Skills Maths
Level 2 Practice Papers



Functional Skills Maths
Level 2 Revision Cards



Functional Skills English Level 2
Practice Papers & Revision Cards



Functional Skills Maths
Level 2 Pocket Revision Guide

Or visit

passfunctionalskills.co.uk








1(d) Next week Jim wants to have a day off.

He would like it to be warm **and** sunny.

Which day should Jim pick?

Tick (✓) your answer.

[1 mark]


						
16°C Monday	15°C Tuesday	23°C Wednesday	19°C Thursday	19°C Friday	12°C Saturday	13°C Sunday



A () B () C () D () E (✓) F () G ()

1(e)

Jim measures the height of a new member at the leisure centre.



How tall is the new member?

Tick (✓) your answer.

[1 mark]



190 km

A ()

190 mm

B ()

190 cm

C (✓)

190 m

D ()

[Total marks: 8]

This is the end of Section A.