



**PASS**  
**FUNCTIONAL**  
**SKILLS**

# Functional Skills Model Solutions

[PassFunctionalSkills.co.uk](https://PassFunctionalSkills.co.uk)

[Book Functional Skills Exams](#)

[See our Functional Skills Course](#)

More Free Revision Materials

[Maths Level 2](#)

[Maths Level 1](#)

[English Level 2](#)

[English Level 1](#)


## NCFE Entry Level 1 Functional Skills Qualification in Mathematics (603/5057/X)

Paper number: Paper 2  
Section B: Calculator Test



**Time allowed:** 1 hour

### Learner instructions

- Answer **all** questions.
- Read each question carefully.
- Write your answers in the spaces provided.
- Show your working.
- This shows you where to write your working and answers. 
- Check your work.

### Learner information

- The maximum mark for this section is **18**.
- The marks available for **each** question are shown in brackets.

### Resources

You will need:

- a pen, with black or blue ink.
- a pencil and eraser.
- a 30 cm ruler.
- a calculator.

To be completed by the assessor		Mark
B	Activity 2	/ 6
	Activity 3	/ 6
	Activity 4	/ 6

**Please complete the details below clearly and in BLOCK CAPITALS.**

Learner name \_\_\_\_\_

Centre name \_\_\_\_\_


Learner number

Centre number

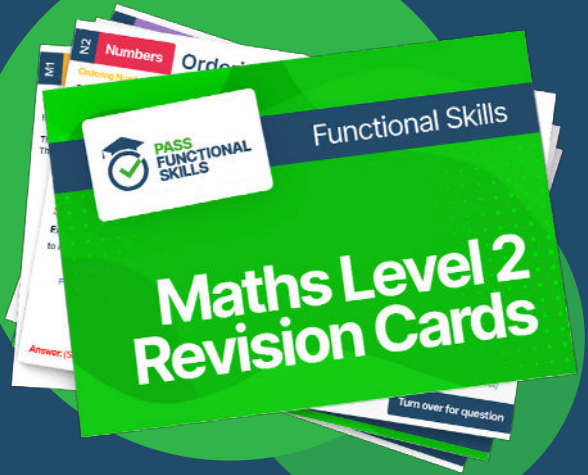
**Do not turn over until the assessor tells you to do so.**



**PASS**  
**FUNCTIONAL**  
**SKILLS**



Functional Skills Maths  
Level 2 Practice Papers



Functional Skills Maths  
Level 2 Revision Cards



Functional Skills English Level 2  
Practice Papers & Revision Cards



Functional Skills Maths  
Level 2 Pocket Revision Guide

Or visit

[passfunctionalskills.co.uk](http://passfunctionalskills.co.uk)

**Activity 2: Post Office worker**

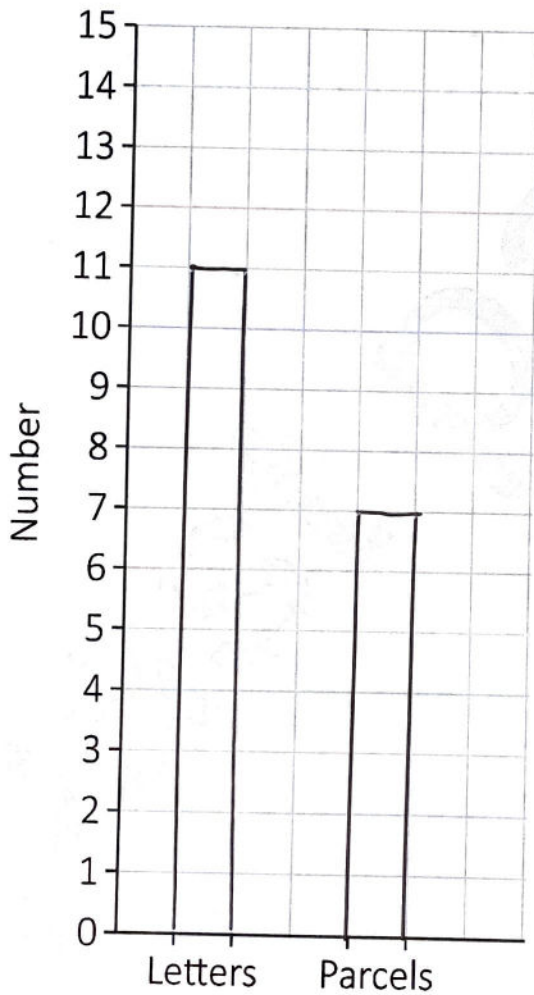
Dani works in the Post Office.

She deals with parcels and letters.

**2(a)** Dani counts 11 letters and 7 parcels.

Complete the bar chart to show the number of letters and parcels.

[2 marks]



2(b) Dani adds up all of the letters and parcels.

Which is the symbol for add?

Circle the correct symbol.

[1 mark]



2(c) Dani thinks there are five more letters than parcels.

Is she correct?

Explain your answer.

[2 marks]



No,  $11 - 7 = 4$ .

There are 4 more letters  
than parcels.

2(d) Dani has the most letters in the last month of the year.

What is the last month of the year?

[1 mark]



December.

[Total marks: 6]

Please turn over

**Activity 3: Post Office notice board**

There are posters on the board about local events.

3(a) Abdu looks at the poster about coffee mornings.

<b>Coffee mornings</b>	
Monday	9.00
Wednesday	10.00
Friday	11.00

Today is Saturday.

The next one is in two days.

What day will this be?

[1 mark]



Monday

3(b) What time does the coffee morning start on Friday?

Tick (✓) your answer.


[1 mark]



A ( ✓ )



B ( )



C ( )



3(c) Abdu goes to the coffee morning.

There are 12 men and 6 women at the coffee morning.

Write the number of men in words.

[1 mark]



Twelve

Please turn over

3(d) Abdu wants a drink and a cake.

He checks the prices.

Price List	
Coffee	60p
Tea	40p
Carrot cake	45p
Chocolate cake	50p
Biscuits	30p

Which cake costs 50p?

[1 mark]



Chocolate

3(e) How much does tea cost?

[1 mark]



40p



3(f) Abdu pays for a cup of tea and a cake.

He has the following coins.

Circle the 20p

[1 mark]



[Total marks: 6]

Please turn over

**Activity 4: Buying stationery**

The Post Office sells stationery.

4(a) Clare buys a folder for £2 and a stapler for £9

How much does she pay in total?

[2 marks]



$$£2 + £9 = £11$$

4(b) She pays with this note.



What is this note?

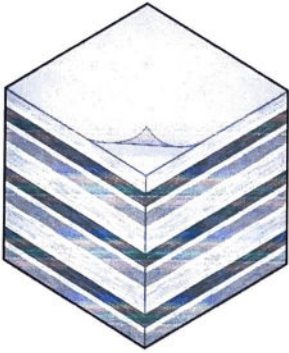
[1 mark]



£20

4(c) Clare buys a block of sticky notes.

What shape is the block of sticky notes?



Tick (✓) your answer.

[1 mark]



Cube

A (✓)

Square

B ( )

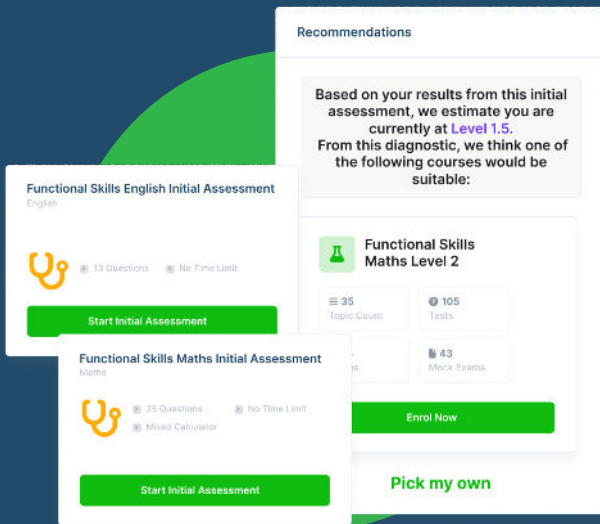
Rectangle

C ( )

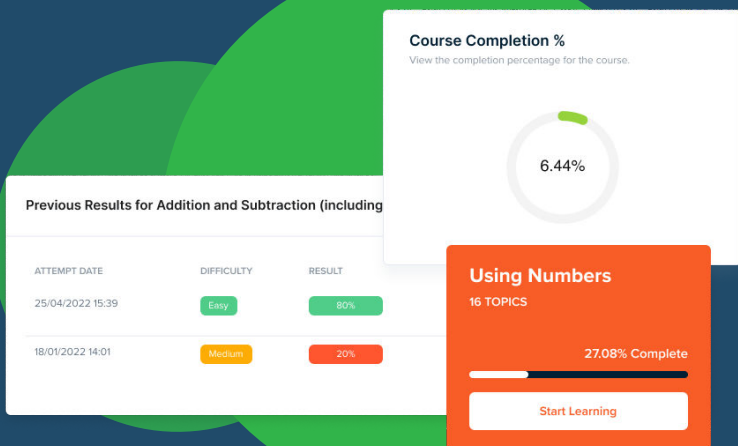
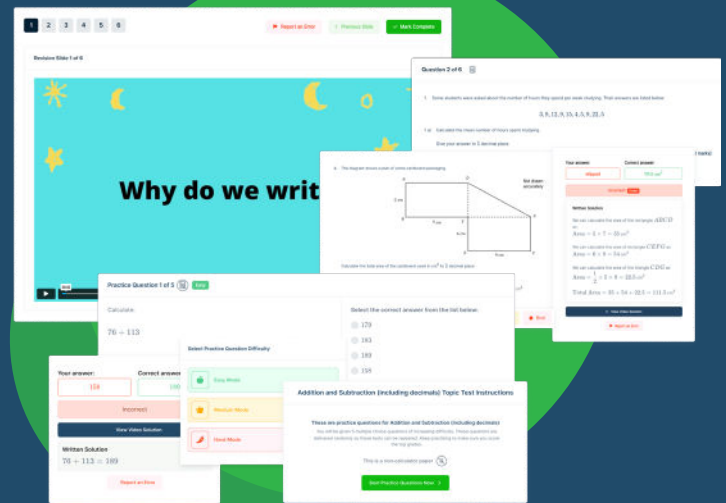


# FUNCTIONAL SKILLS ONLINE COURSES

- ✓ Your answers are analysed to determine your Current Level
- ✓ Suggested courses for you to enrol on based on your calculated level
- ✓ Always know the level you are currently working at
- ✓ Determine when you are ready to sit your exam



- ✓ Explainer videos on every topic
- ✓ Quick-fire style multiple choice questions
- ✓ Test your knowledge with exam-style questions
- ✓ Written solutions for all questions




- ✓ See your progress through as you progress through each topic area
- ✓ Get your average scores for practice questions, topic tests and mock exams
- ✓ View all practice question, topic test and mock exam attempts over time
- ✓ View historical attempts to analyse your progress over time

Or visit  
[passfunctionalskills.co.uk](https://passfunctionalskills.co.uk)

4(d) Clare looks in her pencil case.

She thinks she has 12 pens.

Is she correct?



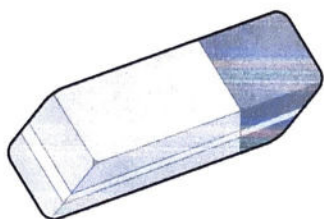
[1 mark]



Yes



4(e) Clare sorts her pens and rubbers.

Where does she put this item?



Tick (✓) your answer.

[1 mark]



A ( )

B (✓)

[Total marks: 6]

This is the end of the assessment.