



PASS
FUNCTIONAL
SKILLS

Functional Skills Model Solutions

PassFunctionalSkills.co.uk

[Book Functional Skills Exams](#)

[See our Functional Skills Course](#)

More Free Revision Materials

[Maths Level 2](#)

[Maths Level 1](#)

[English Level 2](#)

[English Level 1](#)



NCFE Entry Level 1 Functional Skills Qualification in Mathematics


(603/5057/X)

Paper number: Paper 2
Section A: Non-calculator Test



Time allowed: 20 minutes

Learner instructions

- Answer **all** questions.
- Read each question carefully.
- Write your answers in the spaces provided.
- Show your working.
- This shows you where to write your working and answers. 
- Check your work.

Learner information

- The maximum mark for this section is **6**.
- The marks available for **each** question are shown in brackets.

To be completed by the assessor		Mark
A	Activity 1	/ 6

Resources

You will need:

- a pen, with black or blue ink
- a pencil and eraser
- a 30 cm ruler.

Please complete the details below clearly and in **BLOCK CAPITALS**.

Learner name _____

Centre name _____


Learner number

Centre number

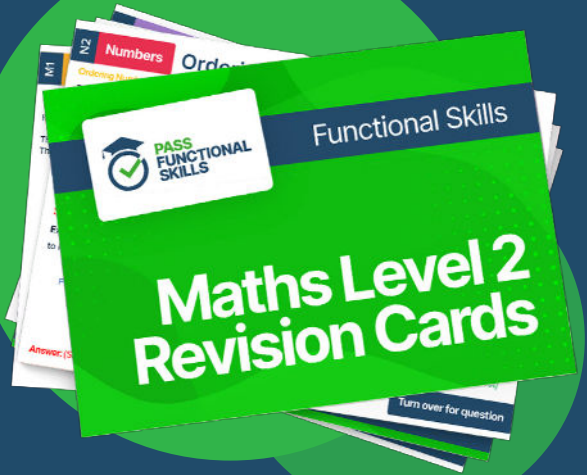
Do not turn over until the assessor tells you to do so.



PASS
FUNCTIONAL
SKILLS



Functional Skills Maths
Level 2 Practice Papers



Functional Skills Maths
Level 2 Revision Cards



Functional Skills English Level 2
Practice Papers & Revision Cards



Functional Skills Maths
Level 2 Pocket Revision Guide

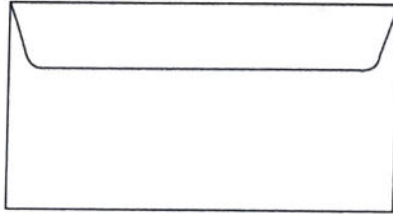

Or visit

passfunctionalskills.co.uk

Activity 1: Post Office customer

George is going to the Post Office.

1(a) George has some letters to post.



What shape are the envelopes?

[1 mark]




Rectangles

1(b) George puts another letter down to the left of envelope A.

Tick (✓) where this will go.

[1 mark]



1(c) George had a pack of 15 envelopes.

He has used nine.


Complete the sum to find the number of envelopes he has left.

[1 mark]



$$15 \square - 9 = 6$$

1(d) George also has some parcels to post.



1



2

He compares the difference in size between parcel 1 and parcel 2.

What does he say?

Tick (✓) your answer

[1 mark]



1 is bigger than 2

1 and 2 are
equal in size

1 is smaller than 2

2 is smaller than 1

A ()

B ()

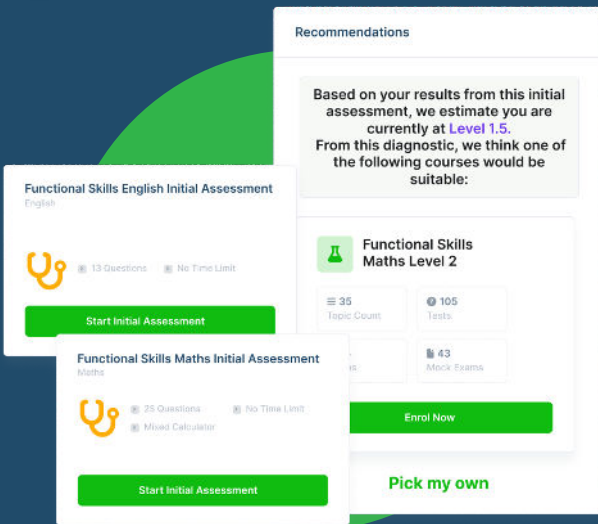
C (✓)

D ()

Please turn over

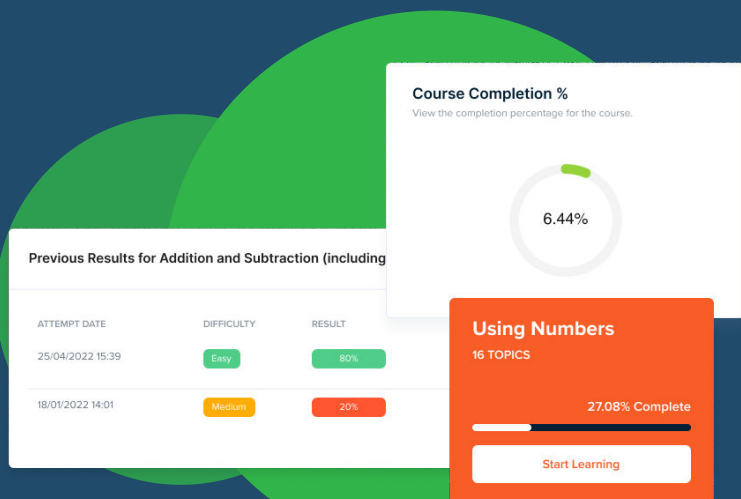
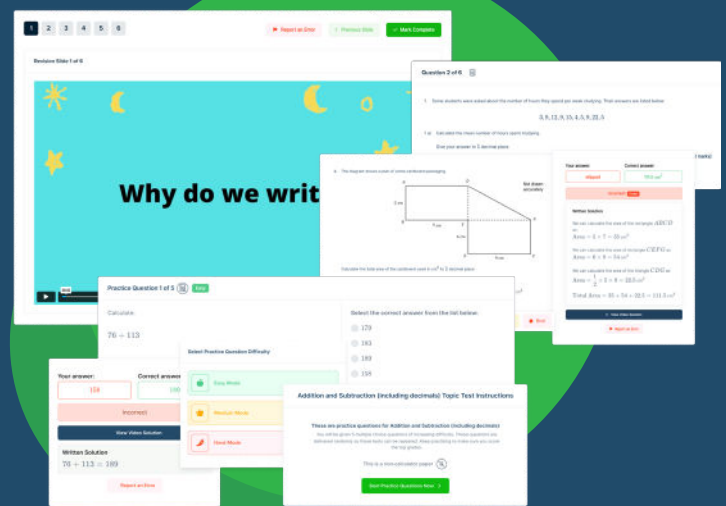


FUNCTIONAL SKILLS ONLINE COURSES



- ✓ Your answers are analysed to determine your Current Level
- ✓ Suggested courses for you to enrol on based on your calculated level
- ✓ Always know the level you are currently working at
- ✓ Determine when you are ready to sit your exam

- ✓ Explainer videos on every topic
- ✓ Quick-fire style multiple choice questions
- ✓ Test your knowledge with exam-style questions
- ✓ Written solutions for all questions




- ✓ See your progress through as you progress through each topic area
- ✓ Get your average scores for practice questions, topic tests and mock exams
- ✓ View all practice question, topic test and mock exam attempts over time
- ✓ View historical attempts to analyse your progress over time

Or visit
passfunctionalskills.co.uk

1(e) The postal worker delivers the parcels in order.

She starts at the lowest house number.



Which one will be delivered last?

[1 mark]





19

1(f) The post is collected at 8 o'clock.

Which clock shows this time?

Tick (✓) your answer

[1 mark]



A ()

B ()

C ()

D (✓)

[Total marks: 6]

This is the end of Section A.

This page is intentionally left blank.