



PASS
FUNCTIONAL
SKILLS

Functional Skills Model Solutions

PassFunctionalSkills.co.uk

[Book Functional Skills Exams](#)

[See our Functional Skills Course](#)

More Free Revision Materials

[Maths Level 2](#)

[Maths Level 1](#)

[English Level 2](#)

[English Level 1](#)



NCFE Entry Level 1 Functional Skills Qualification in Mathematics


(603/5057/X)

Paper number: Paper 1
Section A: Non-calculator Test



Time allowed: 20 minutes

Learner instructions

- Answer **all** questions.
- Read each question carefully.
- Write your answers in the spaces provided.
- Show your working.
- This shows you where to write your working and answers. 
- Check your work.

Learner information

- The maximum mark for this section is **6**.
- The marks available for **each** question are shown in brackets.

Resources

You will need:

- a pen, with black or blue ink
- a pencil and eraser
- a 30 cm ruler.

To be completed by the assessor		Mark
A	Activity 1	/ 6

Please complete the details below clearly and in BLOCK CAPITALS.

Learner name _____

Centre name _____


Learner number

Centre number

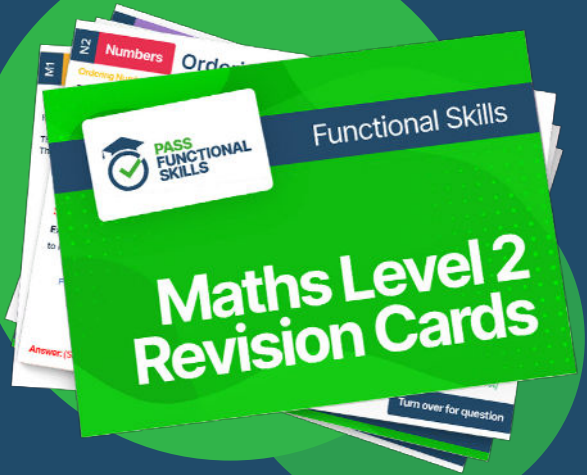
Do not turn over until the assessor tells you to do so.



PASS
FUNCTIONAL
SKILLS



Functional Skills Maths
Level 2 Practice Papers



Functional Skills Maths
Level 2 Revision Cards



Functional Skills English Level 2
Practice Papers & Revision Cards



Functional Skills Maths
Level 2 Pocket Revision Guide

Or visit

passfunctionalskills.co.uk

Activity 1: Mobile phone shop

Jim works in a mobile phone shop.


1(a) Jim starts work at 7 o'clock.

Which clock shows the time Jim starts work?


Tick (✓) your answer.



[1 mark]




A ()



B ()



C (✓)



D ()

1(b) Jim works on Monday.

He has the next two days off.

Write down the days he has off.

[2 marks]



Tuesday and Wednesday

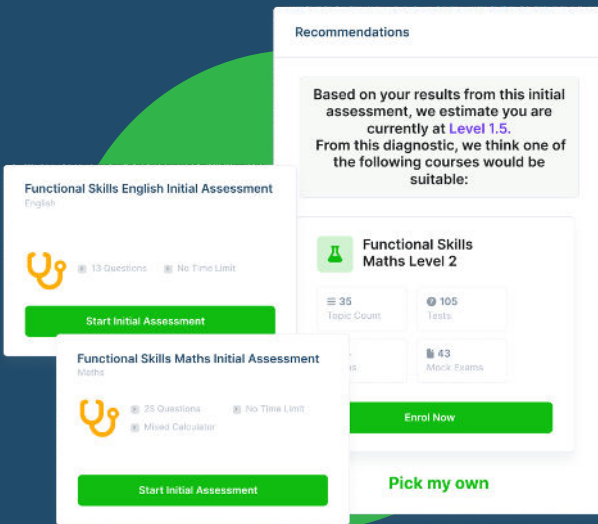
This page is intentionally left blank.

Past Paper

Please turn over

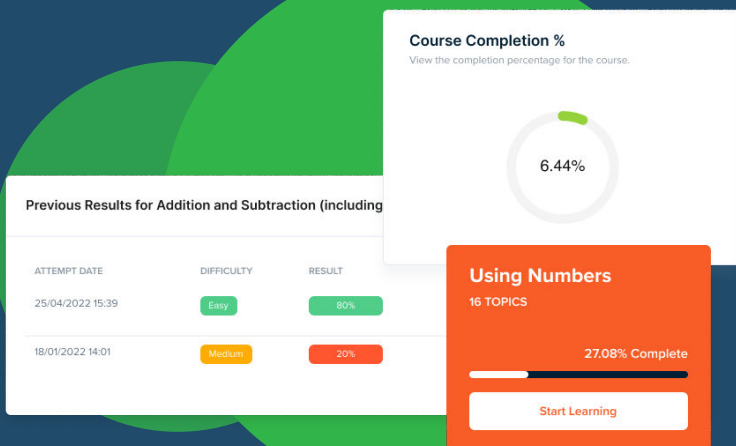
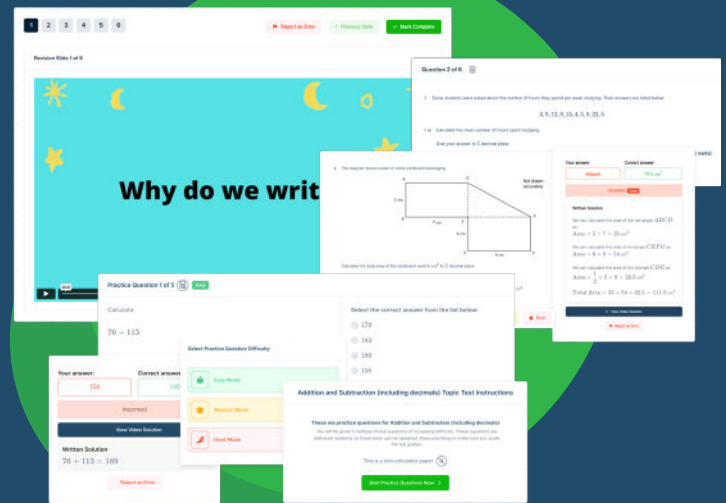


FUNCTIONAL SKILLS ONLINE COURSES



- ✓ Your answers are analysed to determine your Current Level
- ✓ Suggested courses for you to enrol on based on your calculated level
- ✓ Always know the level you are currently working at
- ✓ Determine when you are ready to sit your exam

- ✓ Explainer videos on every topic
- ✓ Quick-fire style multiple choice questions
- ✓ Test your knowledge with exam-style questions
- ✓ Written solutions for all questions





- ✓ See your progress through as you progress through each topic area
- ✓ Get your average scores for practice questions, topic tests and mock exams
- ✓ View all practice question, topic test and mock exam attempts over time
- ✓ View historical attempts to analyse your progress over time

Or visit
passfunctionalskills.co.uk

1(c) Jim sorts the mobile phones.

Tick (✓) the phones that have white screens.

[1 mark]



1(d) How many phones with black **and** white screens are there in total?

[1 mark]



18

1(e) Are there more phones with black screens or more with white screens?

[1 mark]



Black.

[Total marks: 6]

This is the end of Section A.