



**PASS**  
**FUNCTIONAL**  
**SKILLS**

# Functional Skills Model Solutions

[PassFunctionalSkills.co.uk](https://PassFunctionalSkills.co.uk)

[Book Functional Skills Exams](#)

[See our Functional Skills Course](#)

More Free Revision Materials

[Maths Level 2](#)

[Maths Level 1](#)

[English Level 2](#)

[English Level 1](#)

# Functional Skills Mathematics (4748)

## Entry 2 Sample Assessment

### Candidate's paper – Non-calculator Working in a Charity Shop

**Time allowed – 25 minutes**

**Marks: 9**

Name: \_\_\_\_\_

City & Guilds Enrolment Number: \_\_\_\_\_

Date of registration: \_\_\_\_\_

Date of assessment: \_\_\_\_\_

#### **You will need**

- a pen with black or blue ink
- a pencil
- a rubber
- a ruler.

You may use a dictionary.

You must **not** use a calculator.



#### **Instructions**

- Read each question carefully.
- Answer **all** the questions.

#### **Candidate's declaration:**

I confirm that this assessment is my own work.

**Candidate's signature** \_\_\_\_\_


**Date** \_\_\_\_\_

## Non-calculator paper

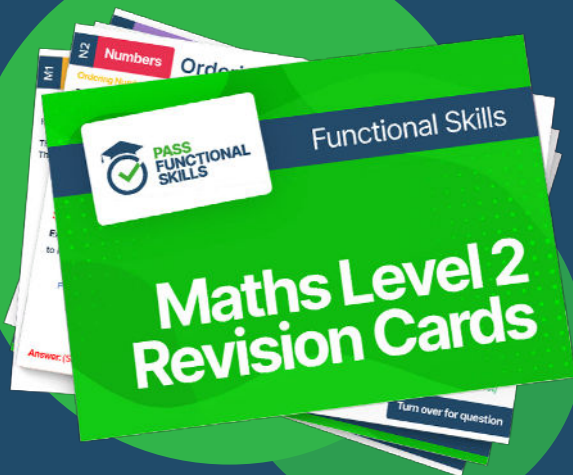
There are **9** marks available.

You must **not** use a calculator.





Functional Skills Maths  
Level 2 Practice Papers



Functional Skills Maths  
Level 2 Revision Cards



Functional Skills English Level 2  
Practice Papers & Revision Cards



Functional Skills Maths  
Level 2 Pocket Revision Guide

Q1

How many hours are there in a day?

.....24.....

1 mark

Q2

What is the next number in this sequence?

66   64   62   60   ..58....

1 mark

Q3

Work out  $98 \div 4 =$ 

.....24..... remainder .....2.....

1 mark

Q4

What is the name of this 3D shape?

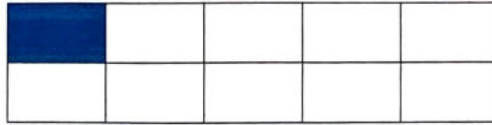


.....Sphere.....

1 mark

Q5

What fraction of this shape is shaded?

 $\frac{1}{10}$ 

1 mark

Q6

Put these measures in order. Start with the **smallest**.

150 ml

75 ml

120 ml

49 ml

~~150 ml~~~~75 ml~~~~120 ml~~~~49 ml~~

1 mark

Q7

The charity shop receives a box of jumpers to sell. The manager asks a volunteer to count the number of jumpers in the box.



What number does she tell the manager?

45

1 mark

- Q8** A woman gives a box with 20 pairs of jeans to a charity shop.  
12 pairs of the jeans are good enough to be sold.  
The rest will be recycled.

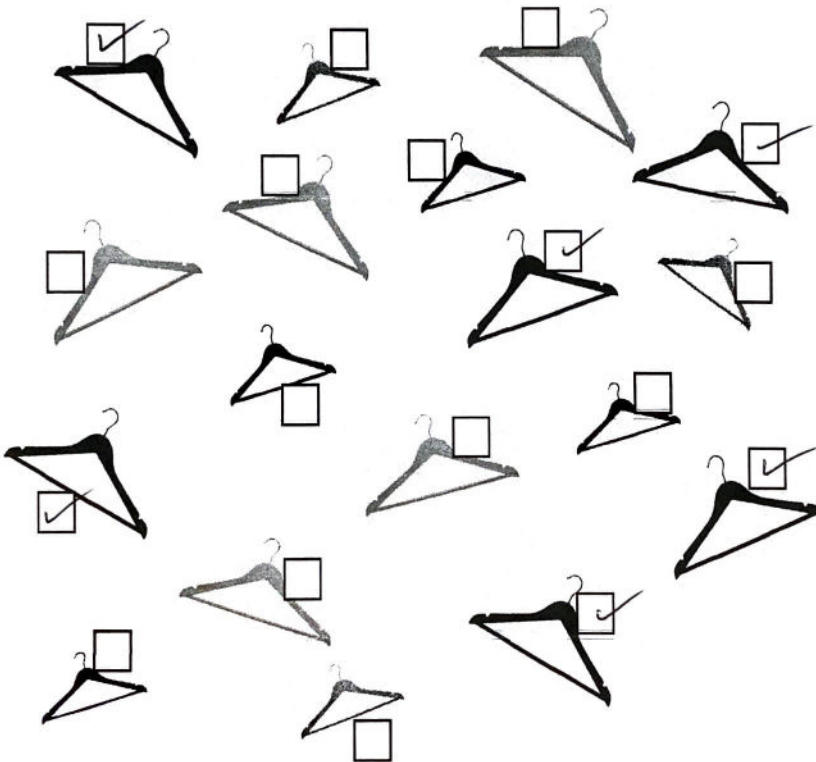
The manager asks the volunteer to work out how many of the pairs of jeans will be recycled.

Complete the calculation to show the number of pairs of jeans that will be recycled.

20	-	12	=	8
----	---	----	---	---

**1 mark**

- Q9** The supervisor wants all the coats put on large black hangers.  
She asks the assistant to sort the hangers and hang up the coats.



Tick the hangers the assistant will use.

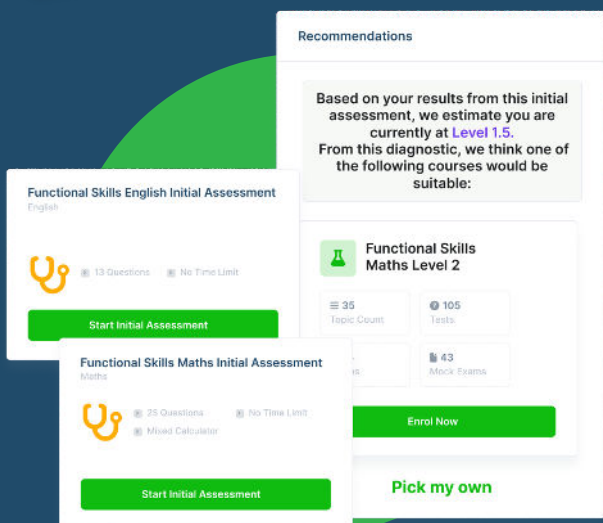
**1 mark**

**Total marks: 9**

**End of non-calculator paper**

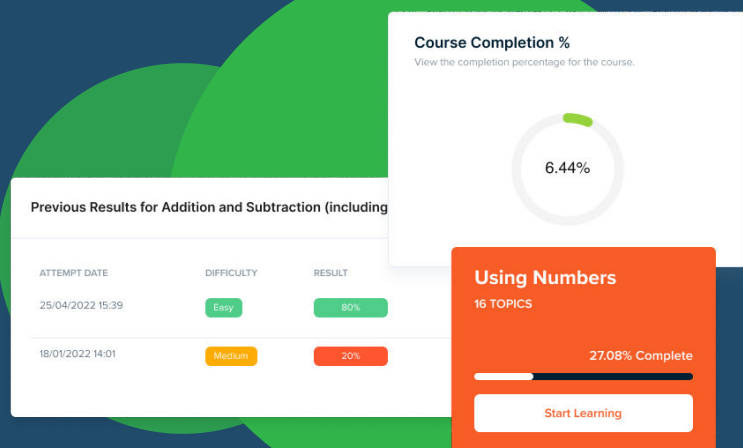
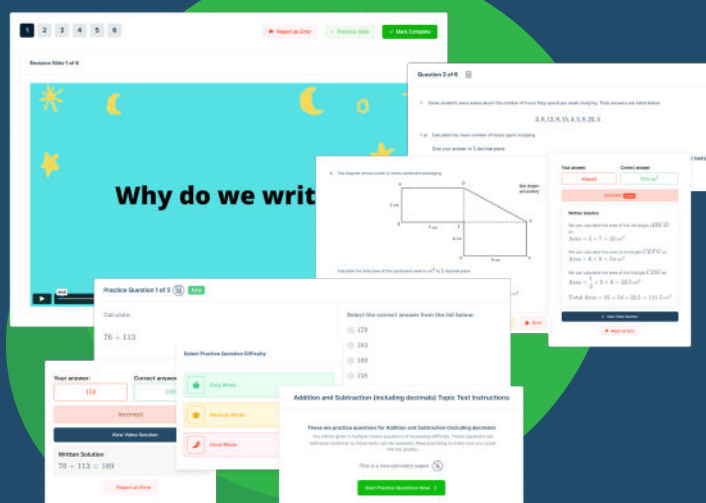


# FUNCTIONAL SKILLS ONLINE COURSES



- ✓ Your answers are analysed to determine your Current Level
- ✓ Suggested courses for you to enrol on based on your calculated level
- ✓ Always know the level you are currently working at
- ✓ Determine when you are ready to sit your exam

- ✓ Explainer videos on every topic
- ✓ Quick-fire style multiple choice questions
- ✓ Test your knowledge with exam-style questions
- ✓ Written solutions for all questions



- ✓ See your progress through as you progress through each topic area
- ✓ Get your average scores for practice questions, topic tests and mock exams
- ✓ View all practice question, topic test and mock exam attempts over time
- ✓ View historical attempts to analyse your progress over time

Or visit  
[passfunctionalskills.co.uk](https://passfunctionalskills.co.uk)