



PASS
FUNCTIONAL
SKILLS

Functional Skills Model Solutions

PassFunctionalSkills.co.uk

[Book Functional Skills Exams](#)

[See our Functional Skills Course](#)

More Free Revision Materials

[Maths Level 2](#)

[Maths Level 1](#)

[English Level 2](#)

[English Level 1](#)

Functional Skills Mathematics (4748)

Entry 1 Sample Assessment

Candidate's paper – Non-calculator Travel

Time allowed – 25 minutes

Marks: 8

Name: _____

City & Guilds Enrolment Number: _____

Date of registration: _____

Date of assessment: _____

You will need

- a pen with black or blue ink
- a pencil
- a rubber
- a ruler.

You may use a dictionary.

You must **not** use a calculator.



Instructions

- Read each question carefully.
- Answer **all** the questions.

Candidate's declaration:

I confirm that this assessment is my own work.

Candidate's signature _____


Date _____

Non-calculator paper

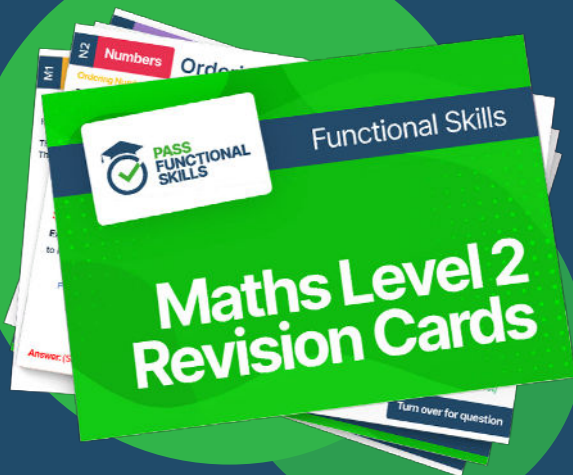
There are **8** marks available.

You must **not** use a calculator.





Functional Skills Maths
Level 2 Practice Papers



Functional Skills Maths
Level 2 Revision Cards



Functional Skills English Level 2
Practice Papers & Revision Cards



Functional Skills Maths
Level 2 Pocket Revision Guide

Q1

Work out $12 + 4 =$

.....16.....

1 mark

Q2

Work out $20 - 13 =$

.....7.....

1 mark

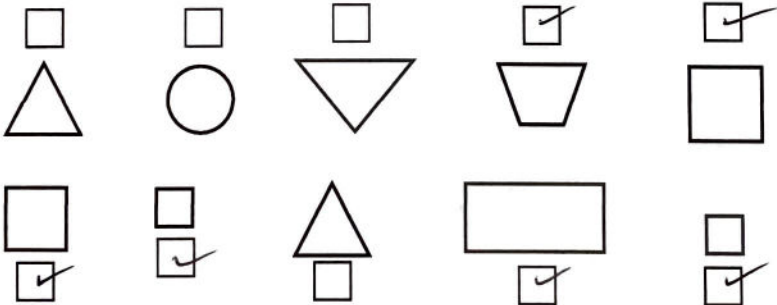
Q3

$8 + 7 = 15$

Write the correct symbol to finish the calculation.

1 mark

Q4

Tick all the shapes with **four** sides.

1 mark

Q5 7 kg is 10 kg.

Choose the correct words to finish the sentence.

- A. the same as ☐
- B. lighter than ☒
- C. heavier than ☐
- D. more than ☐

1 mark

Q6

Ticket machine

Your train fare is **£2**

Use the correct money.
No change given.

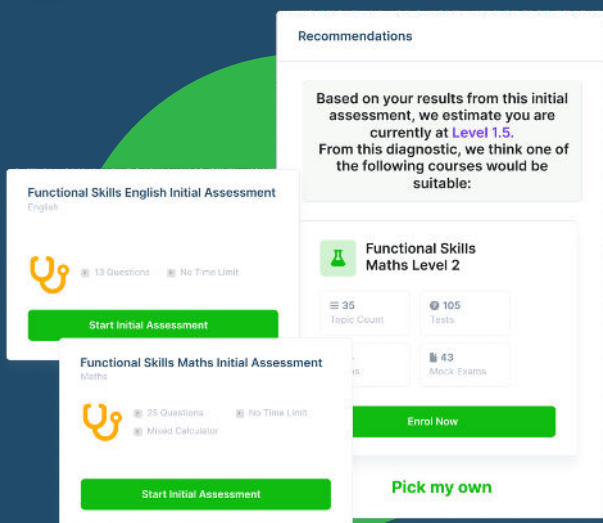


What would you put in the machine? Tick your choice.

1 mark

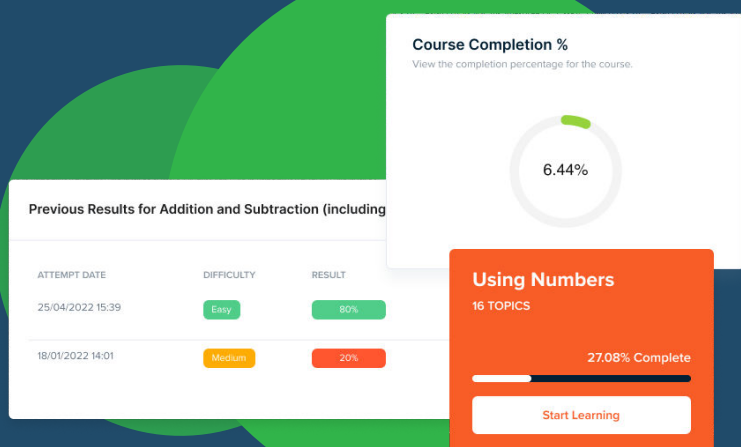
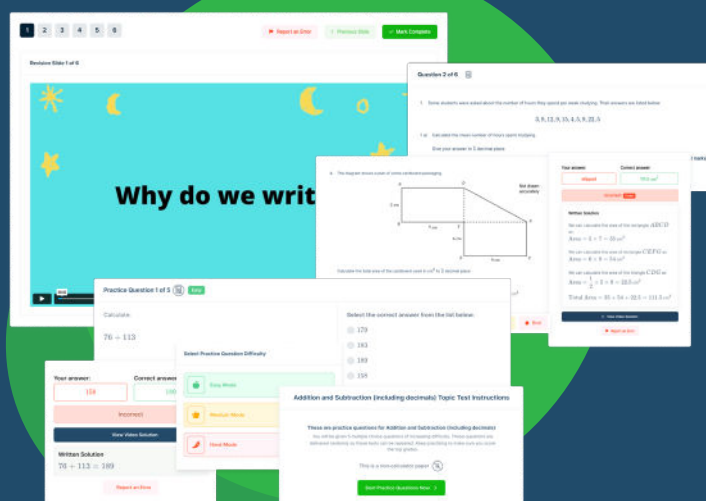


FUNCTIONAL SKILLS ONLINE COURSES



- ✓ Your answers are analysed to determine your Current Level
- ✓ Suggested courses for you to enrol on based on your calculated level
- ✓ Always know the level you are currently working at
- ✓ Determine when you are ready to sit your exam





- ✓ Explainer videos on every topic
- ✓ Quick-fire style multiple choice questions
- ✓ Test your knowledge with exam-style questions
- ✓ Written solutions for all questions



- ✓ See your progress through as you progress through each topic area
- ✓ Get your average scores for practice questions, topic tests and mock exams
- ✓ View all practice question, topic test and mock exam attempts over time
- ✓ View historical attempts to analyse your progress over time

Or visit
passfunctionalskills.co.uk

Q7 These are four train tickets.

 £15	 £4	 £16	 £12
<input type="checkbox"/>	<input type="checkbox"/>	<input checked="" type="checkbox"/>	<input type="checkbox"/>

Tick the **most expensive** train ticket.

1 mark

Q8 A customer has different options for a bus journey.

 £11 Bus ticket	 £9 Bus ticket	 £20 Bus ticket	 £17 Bus ticket
--	---	--	--

Put the tickets in price order starting with the **cheapest**.

£9, £11, £17, £20

1 mark

Total marks: 8

End of non-calculator paper.

