



PASS
FUNCTIONAL
SKILLS

Functional Skills Model Solutions

PassFunctionalSkills.co.uk

[Book Functional Skills Exams](#)

[See our Functional Skills Course](#)

More Free Revision Materials

[Maths Level 2](#)


[Maths Level 1](#)

[English Level 2](#)

[English Level 1](#)

Functional Skills Mathematics (4748)

Entry 1 Sample Assessment



Candidate's paper – Non-calculator Craft Shop

Time allowed – 25 minutes

Marks: 8

Name: _____

City & Guilds Enrolment Number: _____

Date of registration: _____

Date of assessment: _____

You will need

- a pen with black or blue ink
- a pencil
- a rubber
- a ruler.

You may use a dictionary.

You must **not** use a calculator.



Instructions

- Read each question carefully.
- Answer **all** the questions.

Candidate's declaration:

I confirm that this assessment is my own work.

Candidate's signature _____

Date _____

Non-calculator paper


There are **8** marks available.

You must **not** use a calculator.

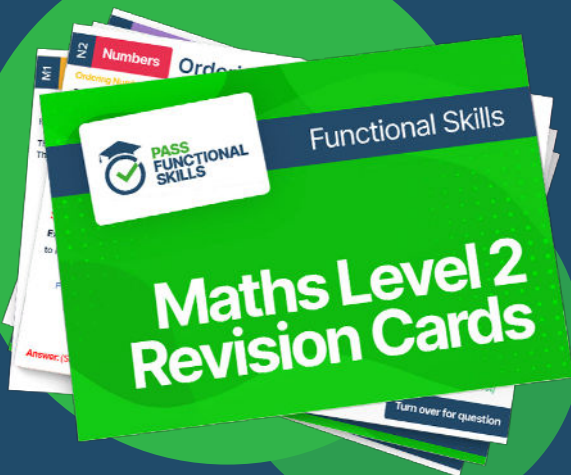




PASS
FUNCTIONAL
SKILLS



Functional Skills Maths
Level 2 Practice Papers



Functional Skills Maths
Level 2 Revision Cards



Functional Skills English Level 2
Practice Papers & Revision Cards



Functional Skills Maths
Level 2 Pocket Revision Guide

Or visit
passfunctionalskills.co.uk

Q1

Work out $15 + 5 =$

.....20.....

1 mark

Q2


What is 18 take away 11 ?

.....7.....


1 mark

Q3


Tick the longest table.



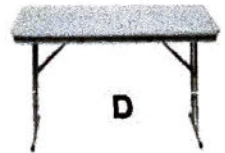
A

☐


B

☐


C

☒


D

☐

1 mark

Q4

14 8 = 6

Write the correct symbol to finish the calculation.

1 mark

Q5



Jug A



Jug B

Jug A has Jug B.

Choose the correct words to finish the sentence.

- A the same amount of water as ☐
- B less water than ☐
- C more water than ☒
- D an equal amount of water to ☐

1 mark

Q6 The craft shop has a delivery of wooden ducks.

The ducks are all different heights.

11cm 6cm 3cm 20cm 12cm

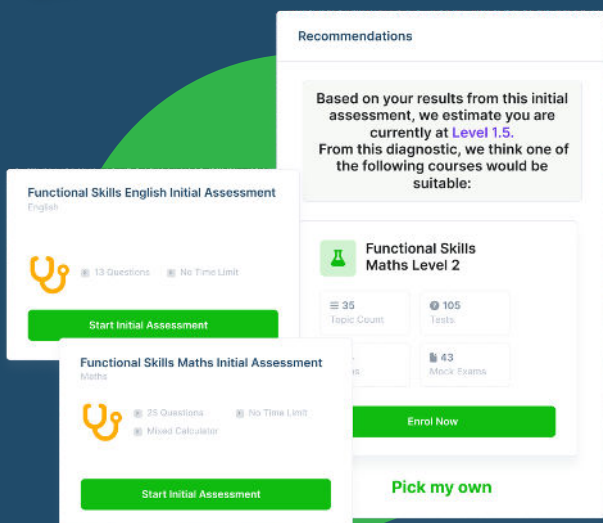
Write these heights in order.
Start with the smallest first.

....3...cm 6...cm 11...cm 12...cm 20...cm

1 mark

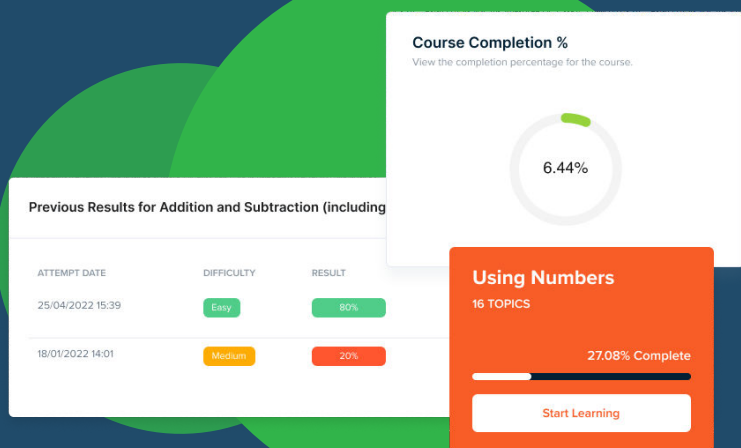
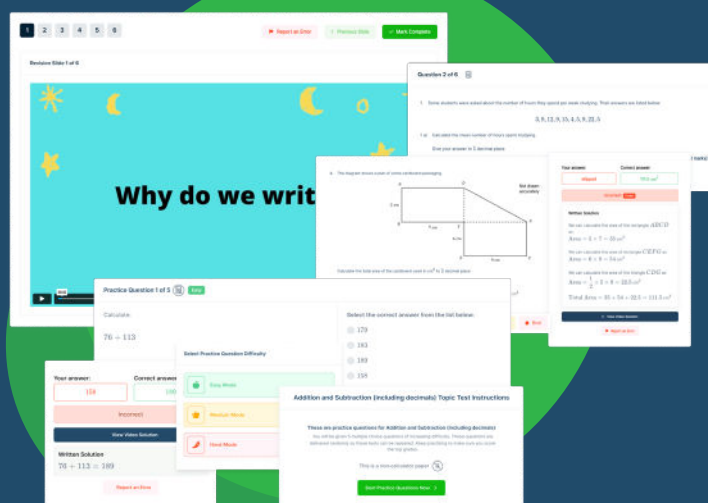


FUNCTIONAL SKILLS ONLINE COURSES



- ✓ Your answers are analysed to determine your Current Level
- ✓ Suggested courses for you to enrol on based on your calculated level
- ✓ Always know the level you are currently working at
- ✓ Determine when you are ready to sit your exam

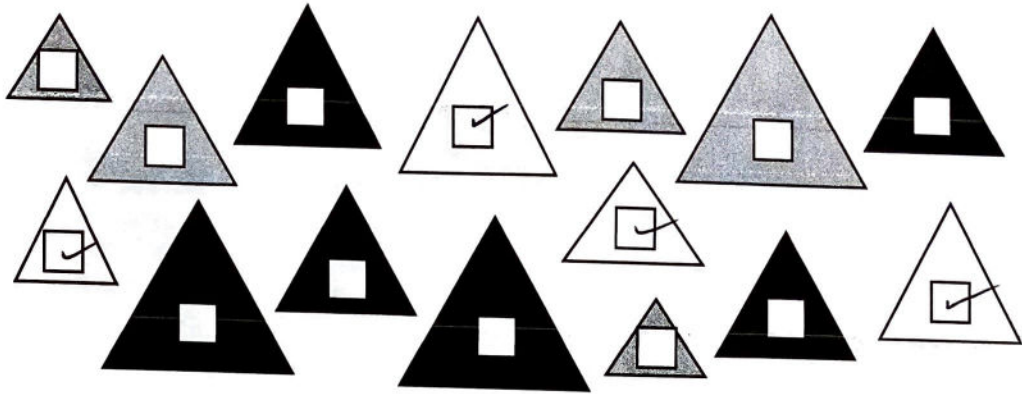
- ✓ Explainer videos on every topic
- ✓ Quick-fire style multiple choice questions
- ✓ Test your knowledge with exam-style questions
- ✓ Written solutions for all questions



- ✓ See your progress through as you progress through each topic area
- ✓ Get your average scores for practice questions, topic tests and mock exams
- ✓ View all practice question, topic test and mock exam attempts over time
- ✓ View historical attempts to analyse your progress over time

Or visit
passfunctionalskills.co.uk

Q7 The craft shop has these shapes to make into gift tags.



The owner wants to use white triangles.

Show which shapes she will use.
Tick them.

1 mark

Q8 A customer buys a sheet of wrapping paper for 12p
She pays with a 20p coin.

This is how she works out how much change she should get.

$$20p - 12p = 8p$$

Show how the customer can check her answer.

Show your check here.

$$8p + 12p = 20p.$$

1 mark

Total marks: 8

End of non-calculator paper.

This page is intentionally blank