



PASS
FUNCTIONAL
SKILLS

Functional Skills Model Solutions

PassFunctionalSkills.co.uk

[Book Functional Skills Exams](#)

[See our Functional Skills Course](#)

More Free Revision Materials

[Maths Level 2](#)


[Maths Level 1](#)

[English Level 2](#)

[English Level 1](#)

Functional Skills Mathematics (4748)

Entry 1 Sample Assessment



www.cityandguilds.com
April 2020
Version 1.0

Candidate's paper – Non-calculator At the Bakery

Time allowed – 25 minutes

Marks: 8

Name: _____

City & Guilds Enrolment Number: _____

Date of registration: _____

Date of assessment: _____

You will need

- a pen with black or blue ink
- a pencil
- a rubber
- a ruler.

You may use a dictionary.

You must **not** use a calculator.



Instructions

- Read each question carefully.
- Answer **all** the questions.

Candidate's declaration:

I confirm that this assessment is my own work.

Candidate's signature _____

Date _____

Non-calculator paper

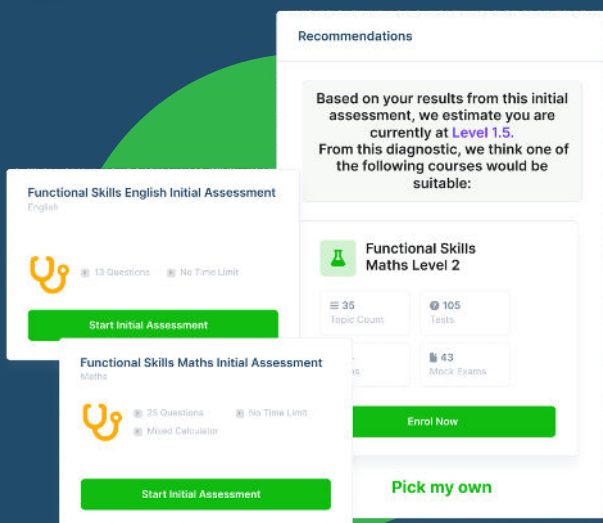
There are **8** marks available.

You must **not** use a calculator.



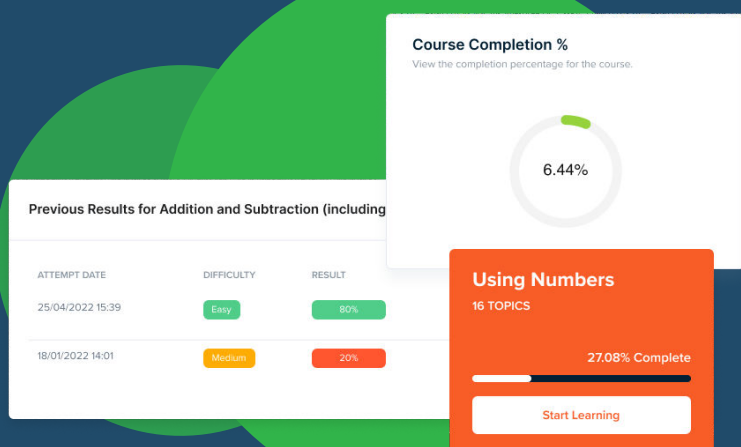
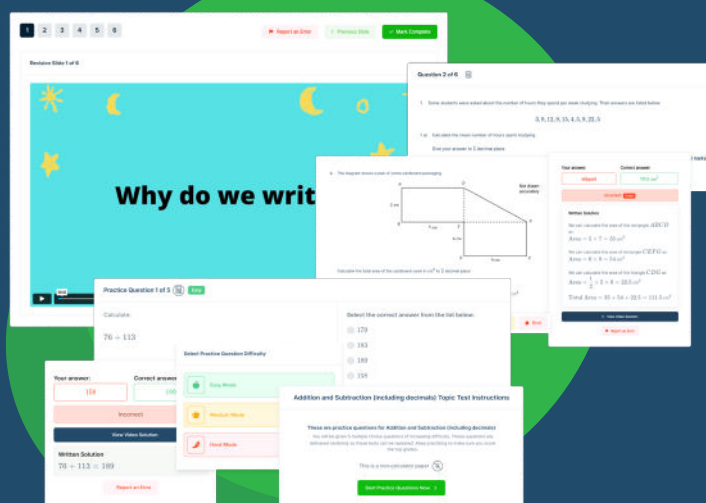


FUNCTIONAL SKILLS ONLINE COURSES



- ✓ Your answers are analysed to determine your Current Level
- ✓ Suggested courses for you to enrol on based on your calculated level
- ✓ Always know the level you are currently working at
- ✓ Determine when you are ready to sit your exam

- ✓ Explainer videos on every topic
- ✓ Quick-fire style multiple choice questions
- ✓ Test your knowledge with exam-style questions
- ✓ Written solutions for all questions



- ✓ See your progress through as you progress through each topic area
- ✓ Get your average scores for practice questions, topic tests and mock exams
- ✓ View all practice question, topic test and mock exam attempts over time
- ✓ View historical attempts to analyse your progress over time

Or visit
passfunctionalskills.co.uk

Q1

Work out $16 + 4 =$

.....20.....

1 mark

Q2

Subtract 8 from 19

.....11.....

1 mark

Q3



Student X



Student Y

Student X is Student Y

Choose the correct words to complete the sentence.

- A the same height as ☐
- B taller than ☒
- C shorter than ☐
- D wider than ☐

1 mark

Q4

What is the name of this coin?



Two pound coin

1 mark

Q5

A bakery has these cakes for sale.

A customer wants to buy the **cheapest** cake.

A



£15

☐

B



£5

☐

C



£4

☒

D




£20

☐Which cake should the customer buy?
Tick one.

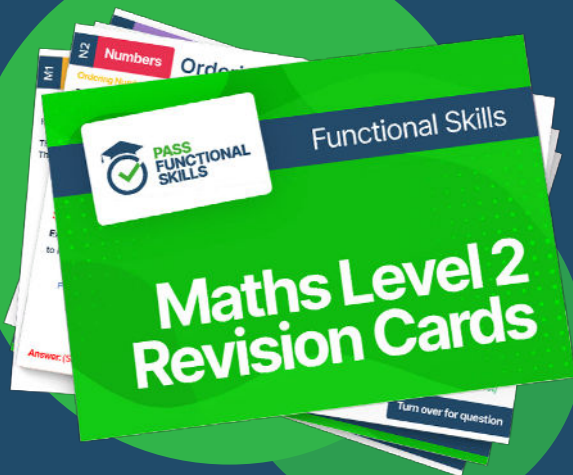
1 mark



PASS
FUNCTIONAL
SKILLS



Functional Skills Maths
Level 2 Practice Papers



Functional Skills Maths
Level 2 Revision Cards



Functional Skills English Level 2
Practice Papers & Revision Cards




Functional Skills Maths
Level 2 Pocket Revision Guide

Or visit
passfunctionalskills.co.uk

Q6 A baker starts to put some cakes on display.

He asks his assistant to finish the display with these cupcakes.



What does the baker tell his assistant?
Finish this sentence.

Please put the cupcakes *in front of* the chocolate cake.

1 mark

- Q7** A customer at the bakery has a £20 note.
Her shopping costs £15.

This is how she works out how much change she will get

$$£20 - £15 = £5$$

Show how the customer can check her answer.

Show your check here

$$£5 + £15 = £20.$$

1 mark

- Q8** A baker asks a trainee to check how many packets of gold candles he ordered.

This is the order.

<u>Candles</u>	<u>Packets</u>
White candles	6
Blue candles	3
Gold candles	2
Silver candles	4

What does the trainee tell the baker?

.....Two..... packets.

1 mark

Total marks: 8

End of non-calculator paper.