


NCFE Entry Level 1 Functional Skills Qualification in Mathematics (603/5057/X)

Paper number: Paper 1
Section A: Non-calculator Test



Time allowed: 20 minutes

Learner instructions

- Answer **all** questions.
- Read each question carefully.
- Write your answers in the spaces provided.
- Show your working.
- This shows you where to write your working and answers. 
- Check your work.

Learner information

- The maximum mark for this section is **6**.
- The marks available for **each** question are shown in brackets.

Resources

You will need:

- a pen, with black or blue ink
- a pencil and eraser
- a 30 cm ruler.

To be completed by the assessor		Mark
A	Activity 1	/ 6

Please complete the details below clearly and in **BLOCK CAPITALS**.

Learner name _____

Centre name _____

Learner number

Centre number

Do not turn over until the assessor tells you to do so.

Activity 1: Mobile phone shop

Jim works in a mobile phone shop.


1(a) Jim starts work at 7 o'clock.

Which clock shows the time Jim starts work?


Tick (✓) your answer.




[1 mark]




A ()



B ()



C ()



D ()

1(b) Jim works on Monday.

He has the next two days off.

Write down the days he has off.

[2 marks]



past paper

This page is intentionally left blank.

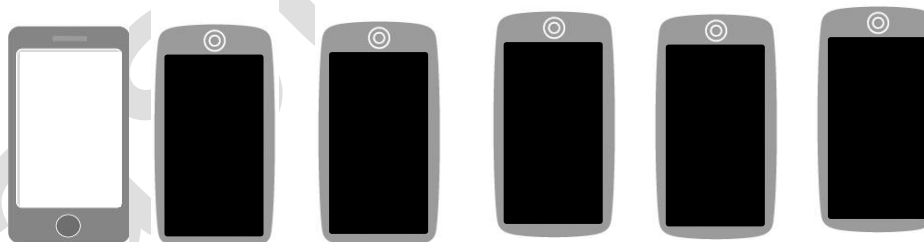
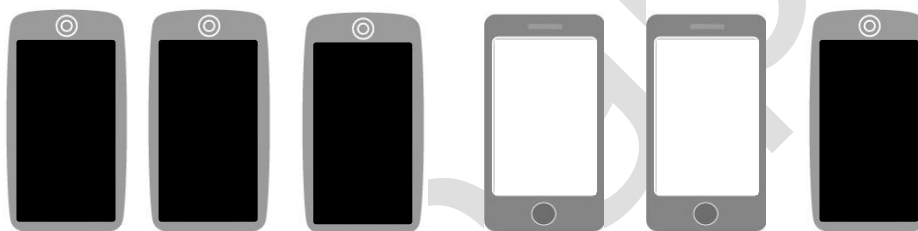
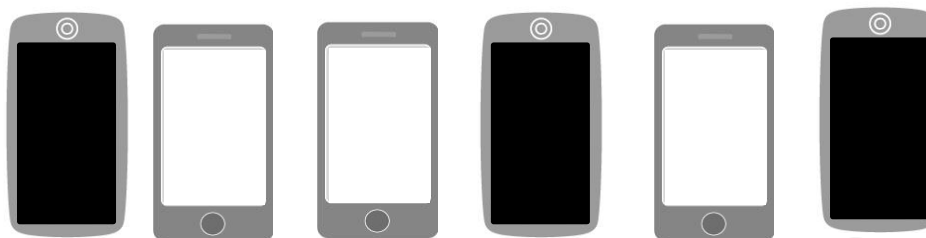
Please turn over

1(c)

Jim sorts the mobile phones.

Tick (✓) the phones that have white screens.

[1 mark]



1(d) How many phones with black **and** white screens are there in total?

[1 mark]



1(e) Are there more phones with black screens or more with white screens?

[1 mark]



[Total marks: 6]

This is the end of Section A.