

Functional Skills Mathematics (4748) Entry 1 Sample Assessment

Candidate's paper – Non-calculator Craft Shop

Time allowed – 25 minutes

Marks: 8

Name: _____

City & Guilds Enrolment Number: _____

Date of registration: _____


Date of assessment: _____

You will need

- a pen with black or blue ink
- a pencil
- a rubber
- a ruler.

You may use a dictionary.

You must **not** use a calculator.



Instructions

- Read each question carefully.
- Answer **all** the questions.

Candidate's declaration:

I confirm that this assessment is my own work.

Candidate's signature _____

Date _____

Non-calculator paper

There are **8** marks available.

You must **not** use a calculator.



Q1

Work out **15 + 5 =**

.....

1 mark

Q2



What is **18 take away 11** ?

.....

1 mark

Q3

Tick the longest table.



1 mark

Q4

14 **8 = 6**

Write the correct symbol to finish the calculation.

1 mark

Q5



Jug A



Jug B

Jug A has Jug B.

Choose the correct words to finish the sentence.

- A the same amount of water as
- B less water than
- C more water than
- D an equal amount of water to

1 mark

Q6 The craft shop has a delivery of wooden ducks.

The ducks are all different heights.

11cm

6cm

3cm

20cm

12cm

Write these heights in order.

Start with the smallest first.

.....cm

.....cm


.....cm

.....cm

.....cm

1 mark

Q7 The craft shop has these shapes to make into gift tags.



The owner wants to use white triangles.

Show which shapes she will use.
Tick them.

1 mark

Q8 A customer buys a sheet of wrapping paper for 12p
She pays with a 20p coin.
This is how she works out how much change she should get.

$$20p - 12p = 8p$$

Show how the customer can check her answer.

Show your check here.

1 mark

Total marks: 8

End of non-calculator paper.

This page is intentionally blank

Functional Skills Mathematics (4748)

Entry 1 Sample Assessment



www.cityandguilds.com
March 2020
Version 1.2

Candidate's paper – Calculator allowed

Craft Shop

Time allowed – 65 minutes

Marks: 24

Name: _____

City & Guilds Enrolment Number: _____

Date of registration: _____

Date of assessment: _____

You will need

- a calculator
- a pen with black or blue ink
- a pencil
- a rubber
- a ruler.

You may use a dictionary.

Instructions


- Read each question carefully.
- Answer **all** the questions.

Candidate's declaration:

I confirm that this assessment is my own work.

Candidate's signature _____


Date _____



Calculator paper

There are **24** marks available.

You may use a calculator.




Q1

Write the seasons of the year in order.
Start with **spring**.

.....

1 mark

Q2



What is the name of this shape?

.....

1 mark

Q3

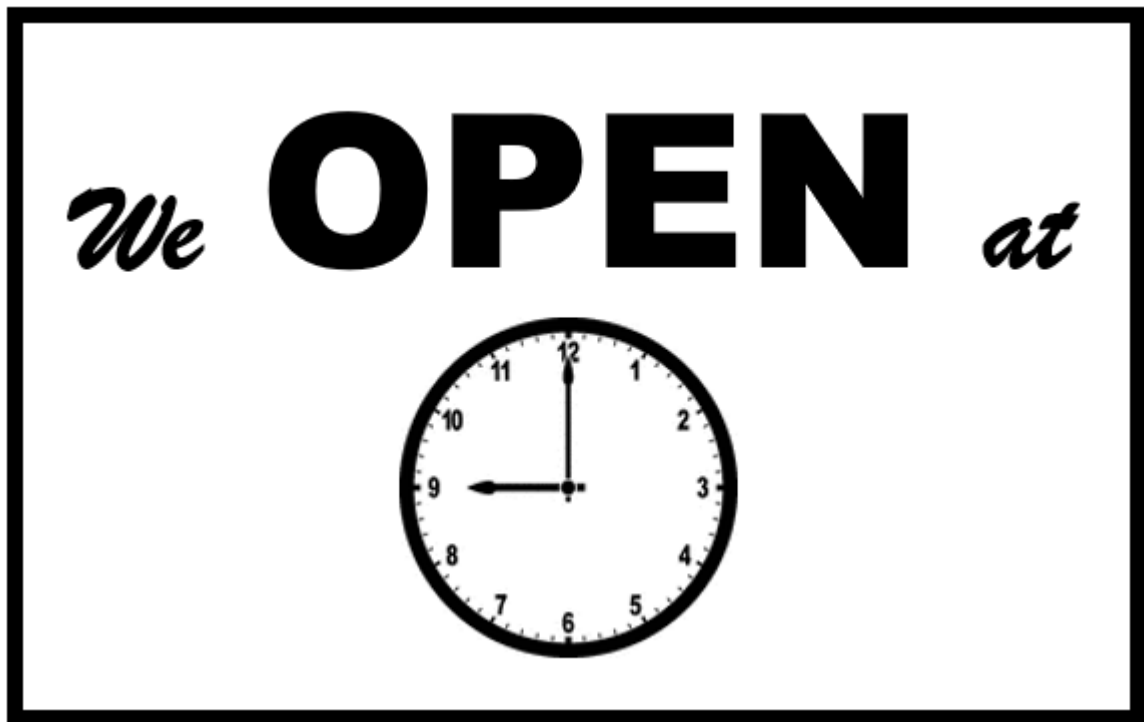


Tick all the 1p coins.

1 mark

Q4 A man visits a craft shop.

This is the sign on the door.



The man checks the time on his watch.



a Is the shop open now?
How do you know?

Yes/No.....

I know because

2 marks

- b** The shop assistant tells the man the craft shop does not open on Sunday and Monday.

How many days of the week is the shop open?

..... days

1 mark

- Q5** The craft shop sells these model animals.

A man wants to buy an owl.

This is the price list.



- a** What does the man need to pay?

£.....

1 mark

The man has these coins.



b

Which coins will he use to pay for the owl?
Tick them.

1 mark

The assistant looks for a model owl.

This is the display in the craft shop.



c

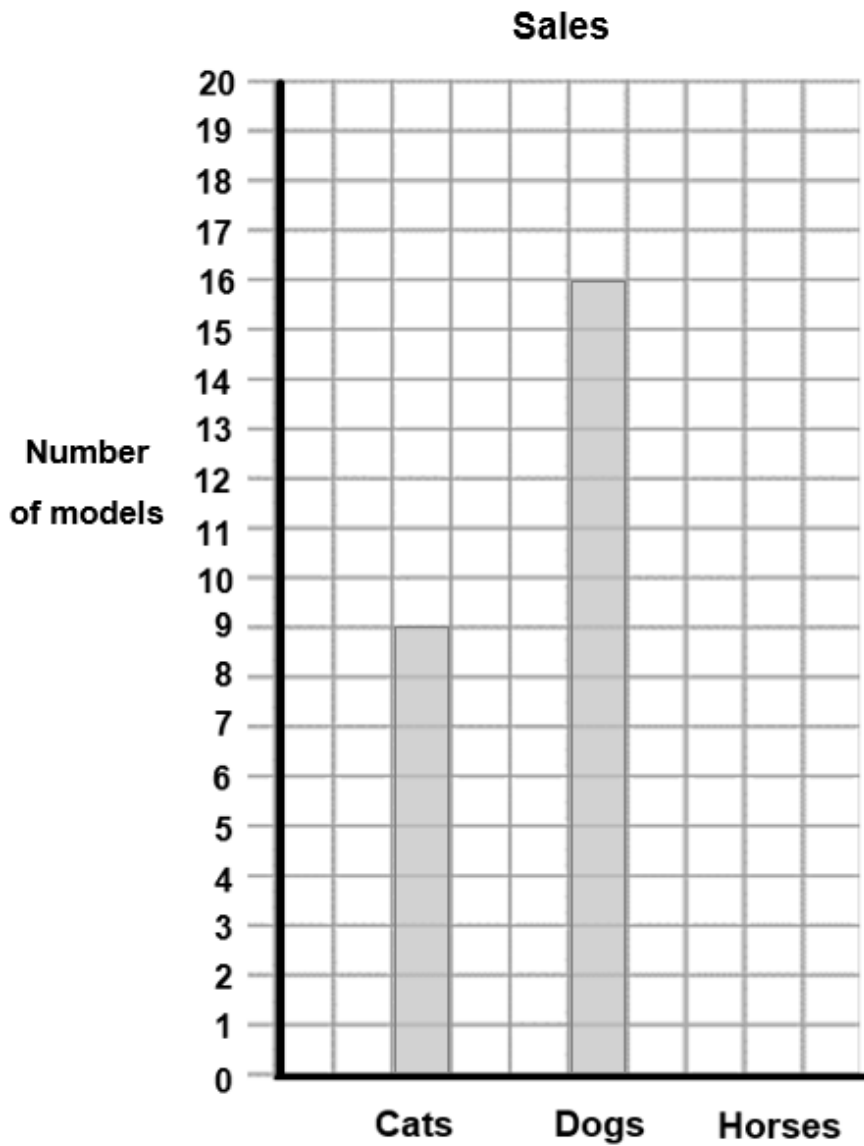
Use the picture of the display to finish this sentence.

The owls arethe table.

1 mark

The manager wants a chart to show the number of model animals sold last week.

The shop sold 13 horses last week.



d

Draw in the bar for **horses**.

1 mark

e

Explain what your chart shows about the numbers of models sold.

1 mark

- 6 A customer wants to buy a plate to paint.
She wants to paint the biggest plate.

She sees these plates.



- a Tick which plate she will buy.

1 mark

The woman pays with this note.



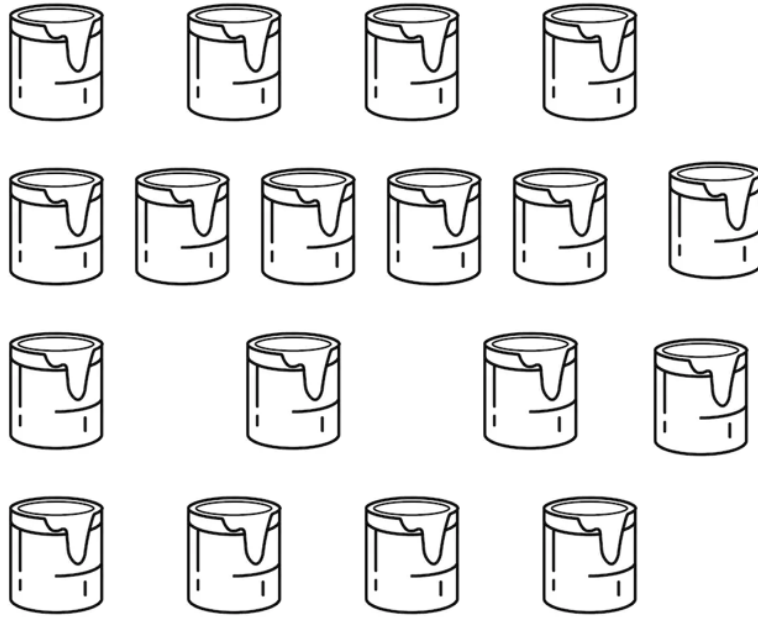
- b What change will she get? Put units on your answer.

Show your working out

Change _____

3 marks

The owner counts these empty pots of paint today.



Yesterday there were 10 empty pots of paint.

c

Complete the sentences.

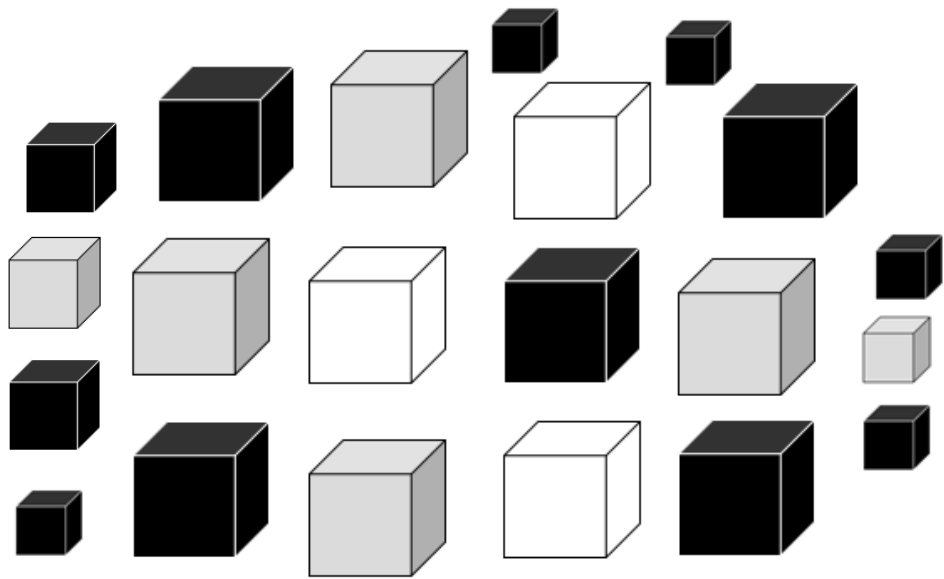
The owner counted empty pots of paint today.

The **number** of empty pots today is more than the number of empty pots yesterday.

2 marks

Q7 The craft shop sells gift boxes.

Here are the boxes.



The owner asks the shop assistant how many black gift boxes there are in the shop.

a What does the shop assistant tell the owner?

There are..... black gift boxes.

1 mark

Small gift boxes cost 20p each.

A customer wants to buy one small gift box.

He has these coins.



b Tick the coin to use to pay for the gift box.

1 mark

8 The manager keeps a record of the number of mugs, bowls and plates sold last week.

He starts to draw a tally chart to show this information.

This is the number of plates sold.



Item	Tally
Large mugs	
Small mugs	
Bowls	
Plates	

a Complete the tally chart to show the number of plates sold.

2 marks

The manager wants to know how many more small mugs were sold than large mugs.

b What will you tell her?

Space for working.

2 marks

The manager also wants to know how many bowls were sold.

c What will you tell her?

.....

1 mark

Total marks: 24

End of calculator paper

This page is intentionally blank

**Published by City & Guilds
5-6 Giltspur Street
London
EC1A 9DE
www.cityandguilds.com**

**City & Guilds is a registered charity
established to promote education and
training**