



FUNCTIONAL SKILLS MATHEMATICS

AQA | Edexcel | City & Guilds | Open Awards | NCFE | Highfield

Level 1

Circles

Materials

- You **cannot** use a calculator for **questions** with this symbol.



Instructions

- Answer **all** questions.
- Answer questions on separate paper.

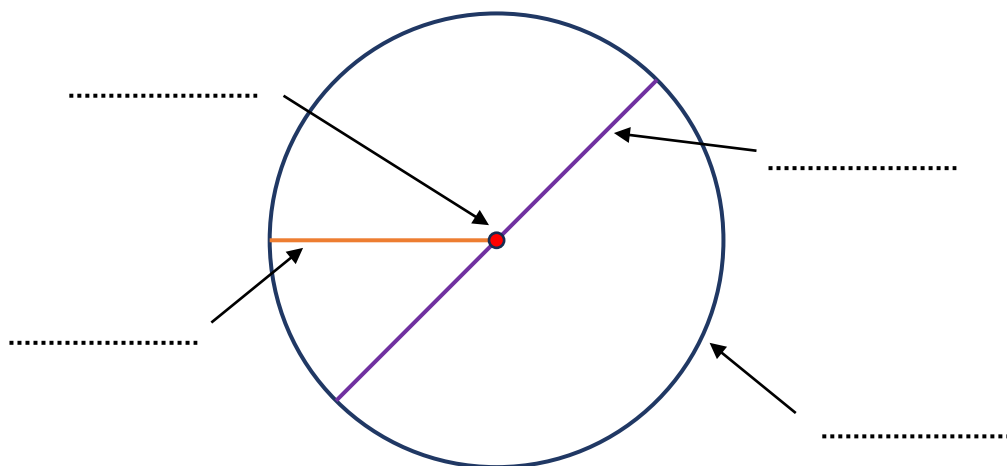
Information and Advice

- The marks for each question are shown in brackets – use this as a guide on how long to spend on each question.
- Read each question carefully before you answer it.
- Check you answers.



Q1

Label the properties on the circle below.

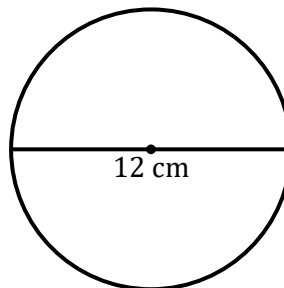


[4 marks]



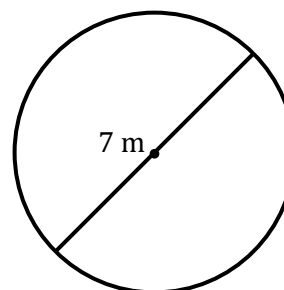
Q2

2(a) What is the radius of the circle shown below?



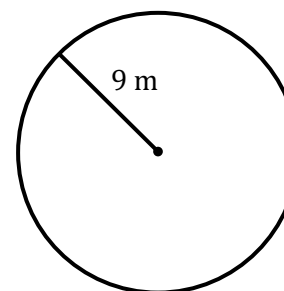
[2 marks]

2(b) What is the radius of the circle shown below?



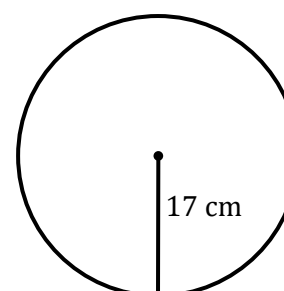
[2 marks]

2(c) What is the diameter of the circle shown below?



[2 marks]

2(d) What is the diameter of the circle shown below?



[2 marks]