


NCFE Entry Level 1 Functional Skills Qualification in Mathematics (603/5057/X)

Paper number: Paper 9
Section A: Non-calculator Test



Time allowed: 20 minutes

Learner instructions

- Answer **all** questions.
- Read each question carefully.
- Write your answers in the spaces provided.
- Show your working.
- This shows you where to write your working and answers. 
- Check your work.

Learner information

- The maximum mark for this section is **6**.
- The marks available for **each** question are shown in brackets.

To be completed by the assessor		Mark
A	Activity 1	/ 6

Resources

You will need:

- a pen, with black or blue ink
- a pencil and eraser
- a 30 cm ruler.

Please complete the details below clearly and in BLOCK CAPITALS.

Learner name _____

Centre name _____

Learner number

Centre number

Do not turn over until the assessor tells you to do so.

Activity 1: On the tram

Rob travels to work on the tram.

1 (a) A tram ticket costs Rob £16 if he buys it at the tram station.

A tram ticket costs Rob £14 if he buys it online.

How much will Rob save if he buys his tram ticket online?

[2 marks]



Blank area for writing the answer to question 1(a).

1 (b) Rob spends £14 on a tram ticket.

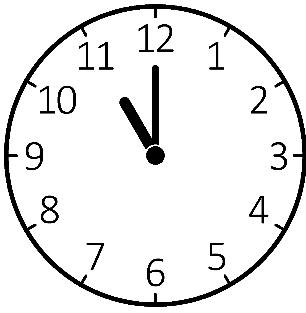
Write 14 in words.

[1 mark]



Blank area for writing the answer to question 1(b).

1 (c) Rob gets to the tram station at the time below.



What time does he get to the tram station?

[1 mark]



1 (d) Five people are on the tram.

Ten more people get on.

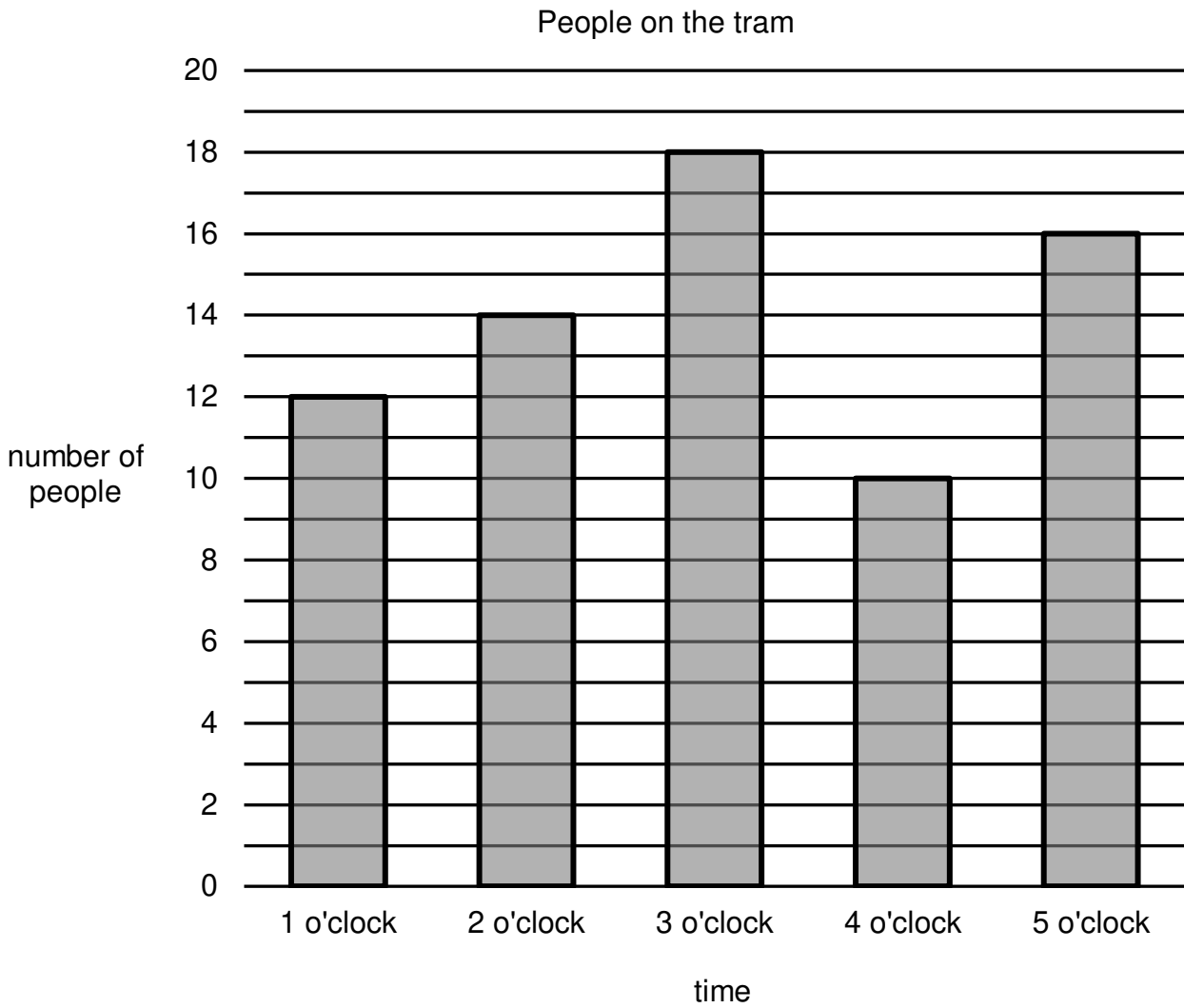
What is $5 + 10$?

[1 mark]



Please turn over

1 (e) This chart shows the number of people on the tram.



At what time were the most people on the tram?

[1 mark]



[Total marks: 6]

This is the end of Section A.

This page is intentionally left blank.